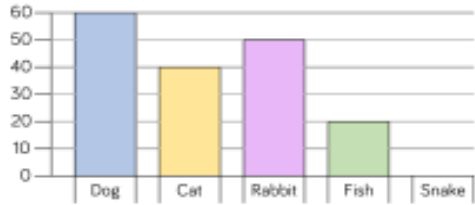


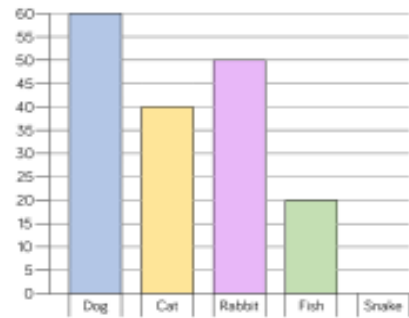
Rosie and Jack have drawn bar charts to show how many people have pets



Rosie says,



I asked more people because my scale goes up in larger jumps.



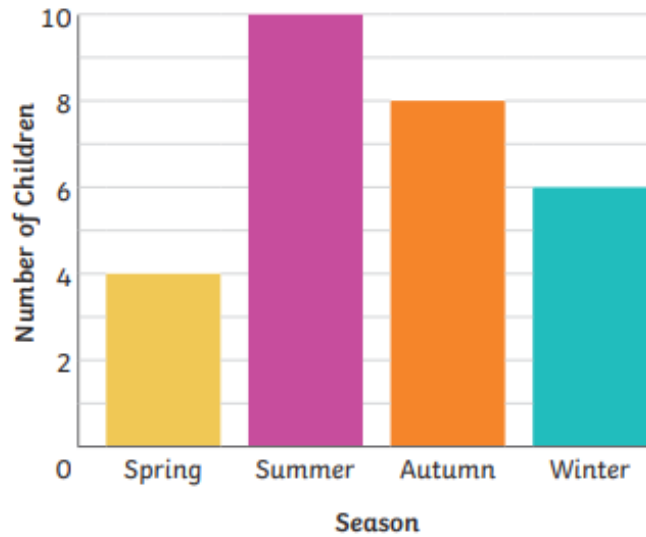
Jack says,



I asked more people because my bars are taller.

Who is correct? Explain why.

- 1) The bar chart shows what seasons the children from Class A were born in.



- a) 2 children have birthdays in the spring. True or false? Explain your reasons.
- b) Does the bar chart tell us how many birthdays are in July? Convince me.
- c) What's the difference between the number of children born in autumn and winter?
- d) How many children are in Class A altogether?