




Adding Fractions

Colour in the fraction bars to show these calculations and then give the answers.

1. $\frac{2}{5} + \frac{1}{5} =$



2. $\frac{1}{3} + \frac{1}{3} =$



3. $\frac{4}{8} + \frac{3}{8} =$



4. $\frac{2}{7} + \frac{3}{7} =$




5. $\frac{1}{4} + \frac{3}{4} =$ or



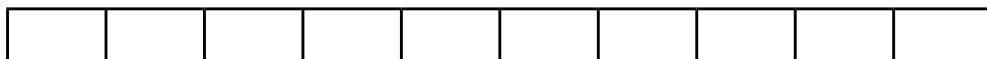
6. $\frac{3}{6} + \frac{1}{6} =$



7. $\frac{4}{9} + \frac{4}{9} =$



8. $\frac{2}{10} + \frac{4}{10} + \frac{3}{10} =$





Draw fraction bars to show these calculations and then give the answers.

9. $\frac{2}{6} + \frac{3}{6} =$

10. $\frac{5}{10} + \frac{3}{10} =$

11. $\frac{1}{5} + \frac{3}{5} =$

12. $\frac{4}{7} + \frac{2}{7} =$



Adding Fractions: Answers

Colour in the fraction bars to show these calculations and then give the answers.

Fractions which are equivalent to those shown should also be accepted as correct answers.

1. $\frac{2}{5} + \frac{1}{5} = \frac{3}{5}$



2. $\frac{1}{3} + \frac{1}{3} = \frac{2}{3}$



3. $\frac{4}{8} + \frac{3}{8} = \frac{7}{8}$



4. $\frac{2}{7} + \frac{3}{7} = \frac{5}{7}$



5. $\frac{1}{4} + \frac{3}{4} = \frac{4}{4}$ or 1




6. $\frac{3}{6} + \frac{1}{6} = \frac{4}{6}$



7. $\frac{4}{9} + \frac{4}{9} = \frac{8}{9}$



8. $\frac{2}{10} + \frac{4}{10} + \frac{3}{10} = \frac{9}{10}$






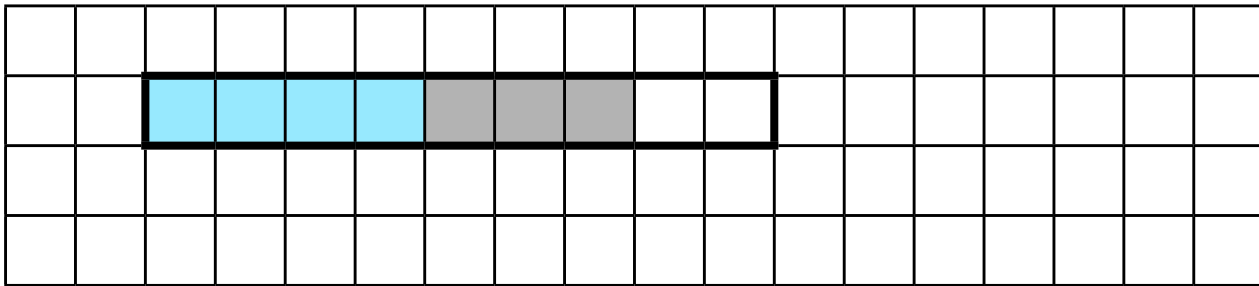
Draw fraction bars to show these calculations and then give the answers.

The fraction bars can be drawn in any size as long as the size and parts coloured in represent the correct fractions. Fractions which are equivalent to those shown should also be accepted as correct answers.

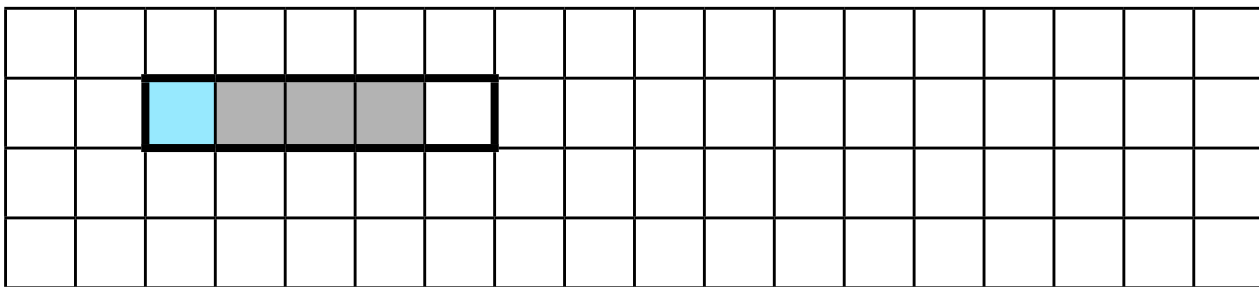
9. $\frac{2}{6} + \frac{3}{6} = \frac{5}{6}$



10. $\frac{5}{10} + \frac{3}{10} = \frac{8}{10}$



11. $\frac{1}{5} + \frac{3}{5} = \frac{4}{5}$



12. $\frac{4}{7} + \frac{2}{7} = \frac{6}{7}$

