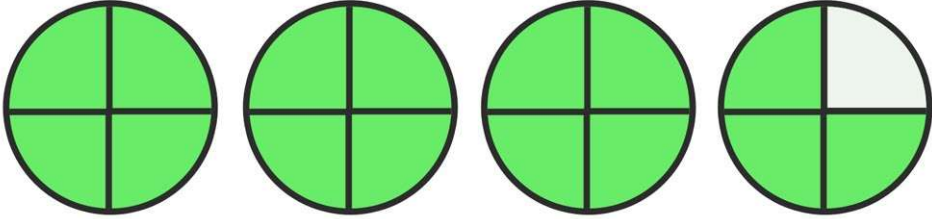
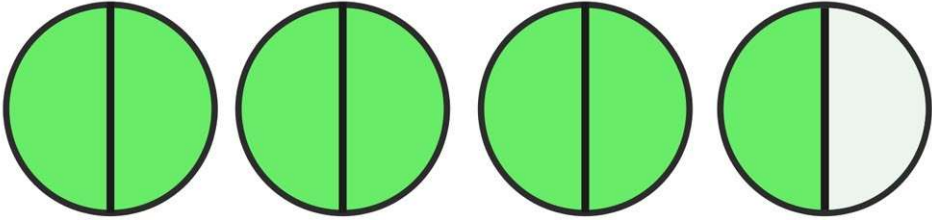
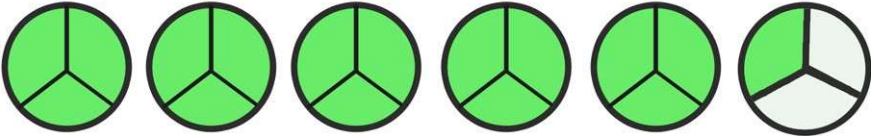


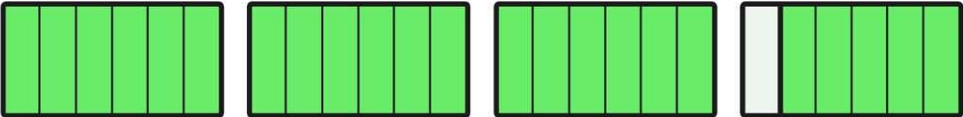


Improper Fractions **Answers**

4. Write the improper fractions and mixed numbers represented by the shapes below.

	Improper Fraction		Mixed Number
a.	$\frac{15}{4}$		$3 \frac{3}{4}$
b.	$\frac{7}{2}$		$3 \frac{1}{2}$
c.	$\frac{16}{3}$		$5 \frac{1}{3}$
d.	$\frac{13}{5}$		$2 \frac{3}{5}$
e.	$\frac{19}{8}$		$2 \frac{3}{8}$
f.	$\frac{23}{6}$		$3 \frac{5}{6}$