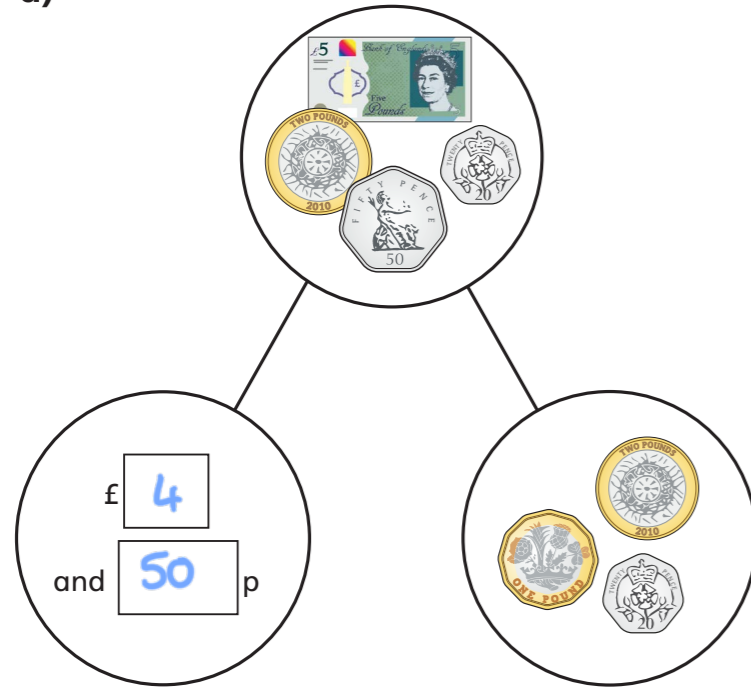


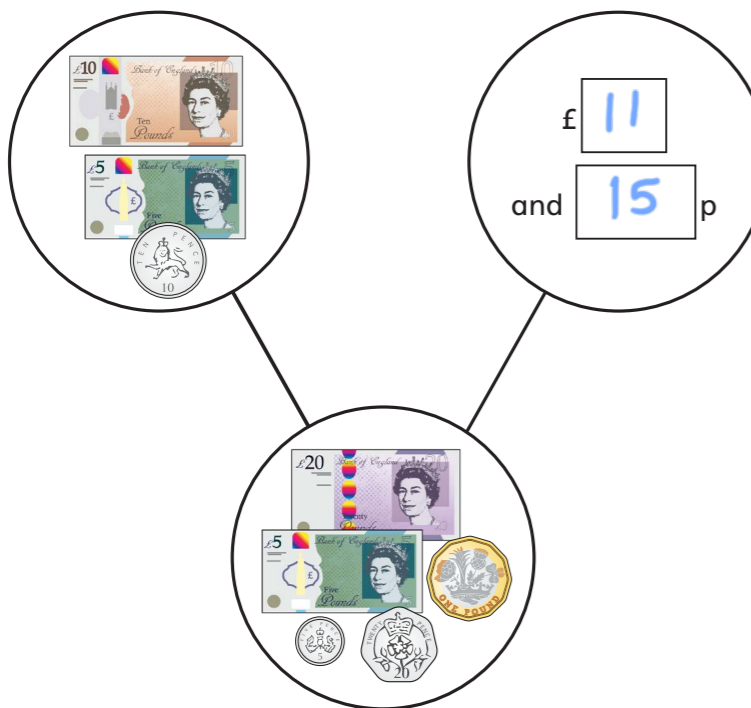
Subtract money

1 Complete the part-whole models.

a)



b)



2 Tommy has £5 and 75p in his pocket.



He puts £2 and 50p in his money box.
How much is left in his pocket?

£ 3 and 25 p

3 Whitney has £4 and 80p.

She buys this pair of socks.

How much money does Whitney have left?



£ 2 and 15 p

4 Complete the statements.

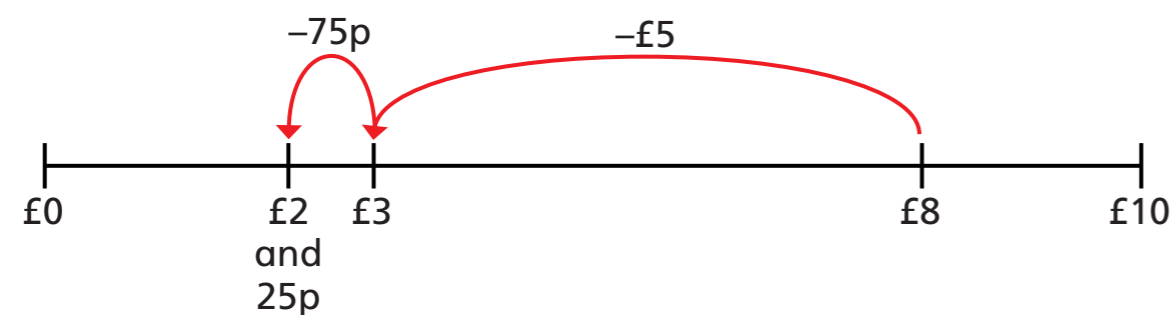
a) £8 and 65p – £5 and 25p = £ and p

b) £8 and 65p – £5 and 65p = £ and p

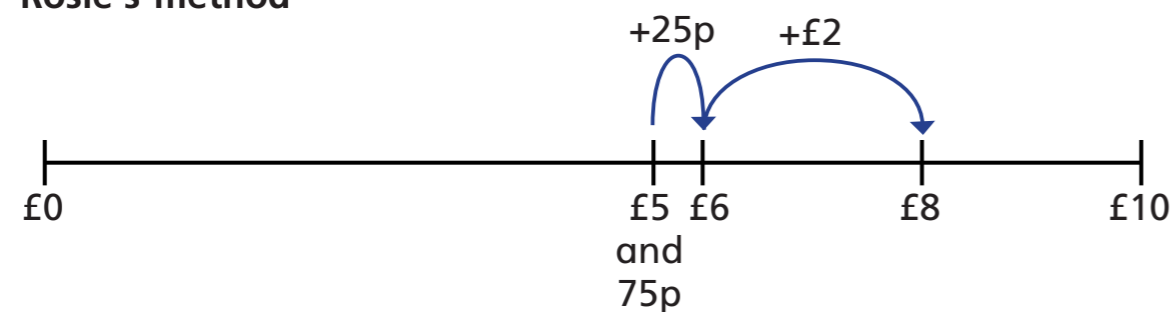
c) £8 and 65p – £8 and 30p = £ and p

5 Amir and Rosie use a number line to subtract £5 and 75p from £8

Amir's method



Rosie's method



Amir and Rosie both get £2 and 25p as their answer.

- a) Explain each of these methods to a partner.
 b) Whose method do you prefer? various answers

Explain why.

6 Complete the number sentences.

a) £3 and 50p – £1 and 20p = £ and p

b) £3 – £1 and 50p = £ and p

c) £6 and 15p – £2 and 85p = £ and p

d) £8 and 7p – £3 and 54p = £ and p

7 Complete the bar models.

