

## Aim

- L.O: To name and locate the main rivers and seas of the UK.
- I can identify rivers and seas using an atlas or map.

## Success Criteria

- I can name the seas surrounding the UK.
- I can name some of the UK's main rivers.
- I can name the seas some rivers flow into.
- I can find the names of seas on a map.
- I can find the names of rivers on a map.
- I can follow a river on a map to find where it starts and ends.

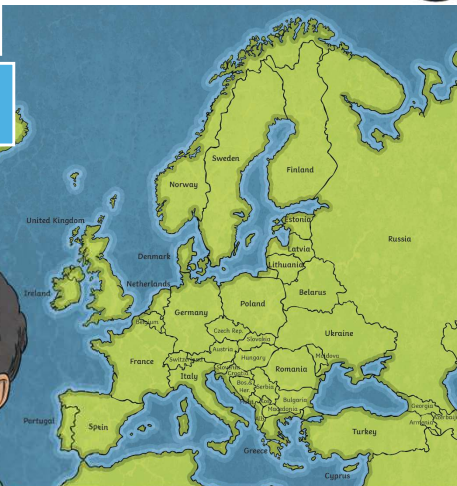
## What Surrounds Us?




? Where is the UK?

? Can you find Austria?

? On the map, how is the UK different to Austria?




## The Seas Around Us



? Do you know where each label should go?

? What clues might help us?

- Irish Sea
- English Channel
- North Sea
- Atlantic Ocean



## Seas Around the UK



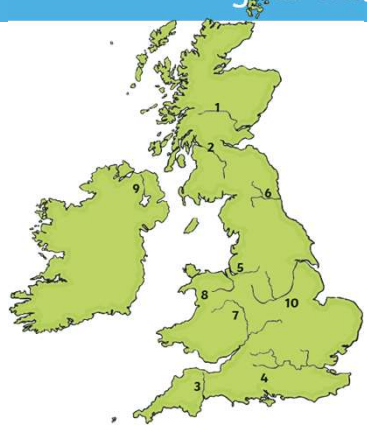
Use an atlas or an online map to find the names of the seas around the UK. Label your map carefully.





## Rivers of the UK

Find out the names of the rivers labelled on your map of the UK.



? Which seas do they flow into?

## Rivers of the UK

Find out the names of the rivers labelled on your map of the UK.

**UK Seas and Rivers**

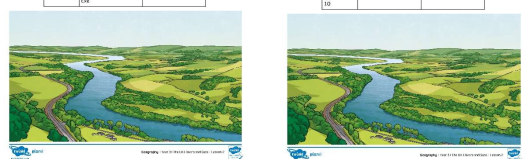
Fill in the table below to show where each of these rivers are in the UK, and the sea that each one flows into:

Number on map	Name of river	Sea it flows into
1	Thames	
2	Humber	
3	Trent	
4	Sty	
5	Don	
6	Great Ouse	
7	Ure	
8	Humber	
9	Mersey	
10	Ure	

**UK Seas and Rivers**

Fill in the table below to show where each of these rivers are in the UK, and the sea that each one flows into:

Number on map	Name of river	Sea it flows into
1		
2		
3		
4		
5		
6		
7		
8		
9		
10		



! Fill in the table to show where each of the rivers are in the UK.

## Where Do Rivers Go?

? Can you find the River Thames?

? Where does it start?

? Where does it end?

What do you notice about where the rivers start and end?



### Aim

- I can name and locate the main rivers and seas of the UK.
- I can identify rivers and seas using an atlas or map.



### Success Criteria

- I can name the seas surrounding the UK.
- I can name some of the UK's main rivers.
- I can name the seas some rivers flow into.
- I can find the names of seas on a map.
- I can find the names of rivers on a map.
- I can follow a river on a map to find where it starts and ends.