

# Tenths


Shade in the given fraction that is in the box. The first one has been done for you.




$\frac{3}{10}$




$\frac{6}{10}$




$\frac{7}{10}$



$\frac{5}{10}$



$\frac{2}{10}$



$\frac{9}{10}$



$\frac{1}{10}$

Write the shaded fraction of the rectangle in the box.



$\frac{2}{10}$

