

# Tenths

Shade in the given fraction that is in the box. The first one has been done for you.



$3/10$



$6/10$



$7/10$




$5/10$



$2/10$




$9/10$



$1/10$

Write the shaded fraction of the rectangle in the box.



$2/10$



$4/10$



$6/10$



$3/10$



$9/10$




$5/10$



$7/10$




$10/10$



$8/10$



$7/10$



$3/10$