

Fractions


What fraction of the shape is shaded?



$$= \frac{2}{6}$$

or

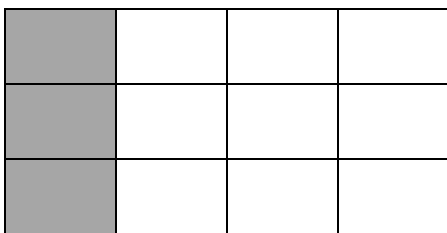
$$\frac{1}{3}$$



$$= \frac{4}{8}$$

or


$$\frac{1}{2}$$



$$= \frac{3}{12}$$

or

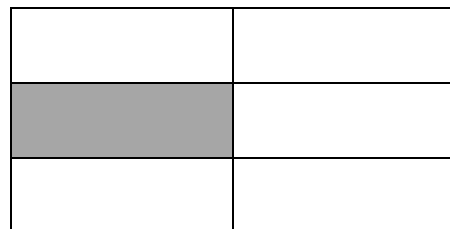
$$\frac{1}{4}$$




$$= \frac{3}{10}$$



$$= \frac{1}{4}$$



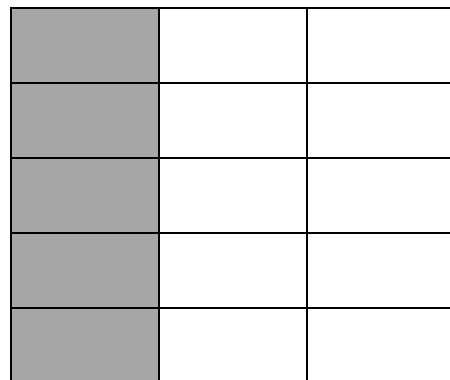
$$= \frac{1}{6}$$



$$= \frac{2}{8}$$

or

$$\frac{1}{4}$$



$$= \frac{5}{15}$$

or

$$\frac{1}{3}$$