

1 Match the amounts that are equal.

16p



twenty-five pence



£25



sixty pence



twenty pounds



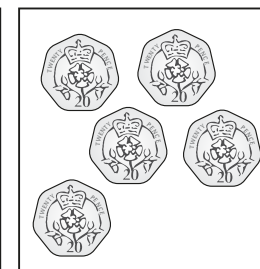
2 How much money does each person have?



3



I can make the same amount of money in many ways.



What amount has Mo made?

Make this amount another way.

Draw your coins.

Compare answers with a partner. Is there another way?

4

Dora earns £10 for walking the dog.


Which money is Dora given?



3



I can make the same amount of money in many ways.



What amount has Mo made?

Make this amount another way.

Draw your coins.

Compare answers with a partner. Is there another way?



4

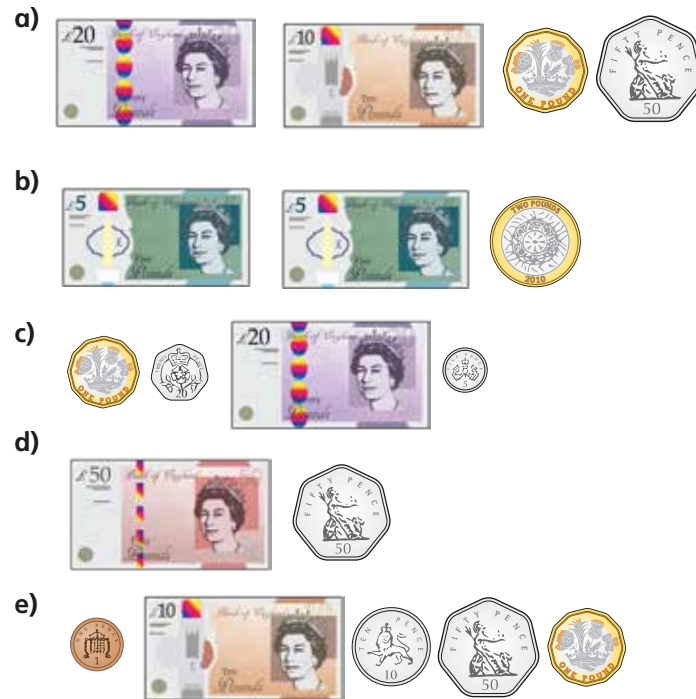
Dora earns £10 for walking the dog.

Which money is Dora given?



5

Count the money.



6

Jack has 4 silver coins and Rosie has 5 silver coins.

Show that Jack can have more money than Rosie.

Compare answers with a partner.

