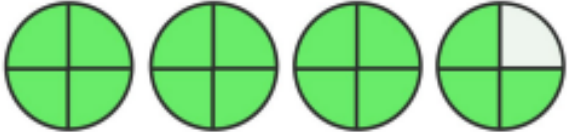







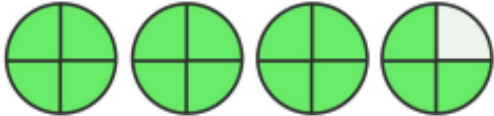
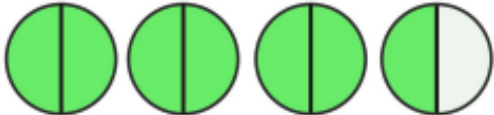




# Improper Fractions

4. Write the improper fractions and mixed numbers represented by the shapes below.

	Improper Fraction		Mixed Number
a.		_____	_____
b.		_____	_____
c.		_____	_____
d.		_____	_____
e.		_____	_____
f.		_____	_____

# Improper Fractions Answers

4. Write the improper fractions and mixed numbers represented by the shapes below.

	Improper Fraction		Mixed Number
a.		$\frac{15}{4}$ _____	$3\frac{3}{4}$ _____
b.		$\frac{7}{2}$ _____	$3\frac{1}{2}$ _____
c.		$\frac{16}{3}$ _____	$5\frac{1}{3}$ _____
d.		$\frac{13}{5}$ _____	$2\frac{3}{5}$ _____
e.		$\frac{19}{8}$ _____	$2\frac{3}{8}$ _____
f.		$\frac{23}{6}$ _____	$3\frac{5}{6}$ _____