




What is area?

Area is the size of a surface.

For each pair of shapes, circle the shape with the greater area.



Amy draws this shape.



- a) To the left, draw the same shape with a smaller area.
- b) To the right, draw the same shape with a greater area.

Do the same again with the following shapes:

