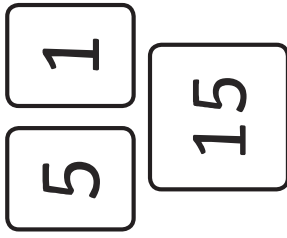


Year 2 Spring 1 Maths Activity Mat 1 Answers

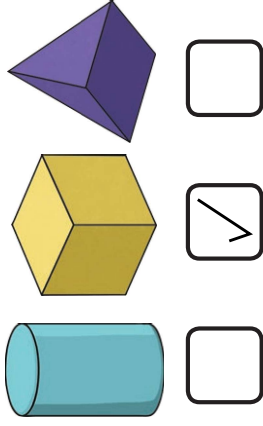
Section 1

Make the lowest number you can with the cards. You can only use each digit once.



Section 2

Which 3D shape has six faces? Tick the correct shape.



Section 3

$$25 - 12 =$$

13

$$24 - 13 =$$

11

$$18 - 11 =$$

7

Section 4

14 people are watching a film. 5 people leave before the end. How many people watch the film until the end?



Section 5

Write two different ways of making 6p using 1p, 2p and 5p coins.

2 of the following:

1p + 5p	2p + 2p + 2p
1p + 1p + 2p + 2p	4 × 1p + 2p
6 × 1p	2 × 2p + 2 × 1p

Section 6

What are the next three numbers?

12, 14, 16, 18, 20, 22



Section 7

If $16 = 10 + 6$, then $21 =$

20 + 1

Section 8

Measure the line.

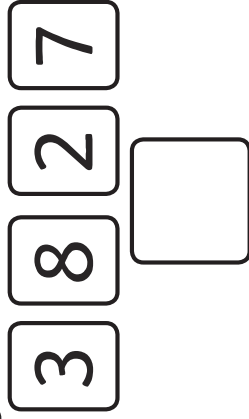


3cm

Year 2 Spring 1 Maths Activity Mat 1

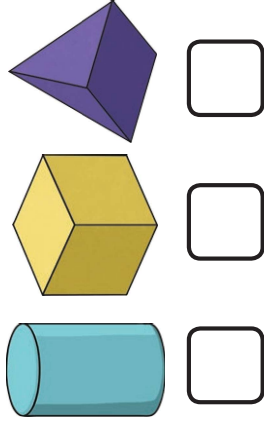
Section 1

Make the lowest two-digit number you can with the cards. You can only use each digit once.



Section 2

Which 3D shape has three faces? Tick the correct shape.



Section 3

$45 - 15 =$

$28 - 17 =$

$33 - 11 =$

Section 4

23 people are watching a film. 12 people leave before the end. How many people watch the film until the end?



Section 5

Write two different ways of making 10p using 1p, 2p and 5p coins.

Section 6

What are the next three numbers?

13, 16, 19, , ,



Section 7

If $52 = 50 + 2$,
then $63 =$

Section 8

Measure the line.


cm