

Section 1

Complete this calculation:

$$103 - 27 = \boxed{}$$

Section 2

What is 7 more than 68?

Section 4

$$\boxed{} \times 4 = 24$$

$$\boxed{} \div 4 = 9$$


Section 3

There are 217 houses on one side of the road and 194 on the other side. How many houses are there altogether?



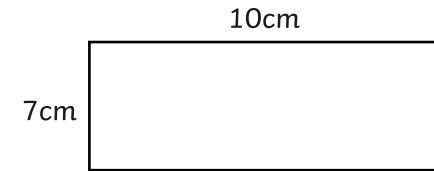
Section 5

It is now 12:35. What time will it be in half an hour?



Section 6

What is the perimeter of this rectangle?



Section 7

A bacon sandwich costs £2.15.

How much do 2 bacon sandwiches cost?

Section 8

What is 534 subtract 200?

Year 3 Maths Activity Mat: 4

Answers

Section 1

Complete this calculation:

$$103 - 27 = \boxed{76}$$

Section 2

What is 7 more than 68?

75

Section 4

$$\boxed{6} \times 4 = 24$$

$$\boxed{36} \div 4 = 9$$

Section 3


There are 217 houses on one side of the road and 194 on the other side. How many houses are there altogether?



411

Section 5

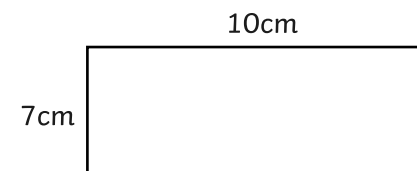
It is now 12:35. What time will it be in half an hour?



1:05

Section 6

What is the perimeter of this rectangle?



34cm

Section 7

A bacon sandwich costs £2.15.

How much do 2 bacon sandwiches cost?

£4.30

Section 8

What is 534 subtract 200?

334