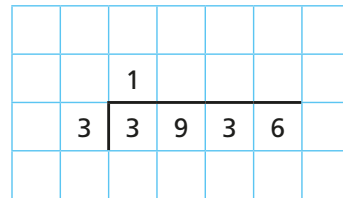
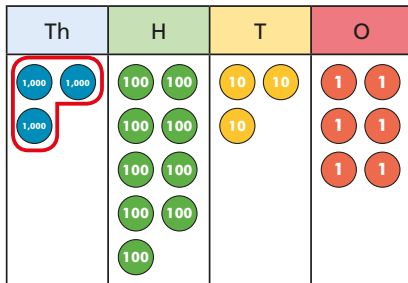


- 1 a) Circle the groups of 3 to help you complete the sentences and calculation.

The first step has been done for you.



There is  group of 3 thousands.

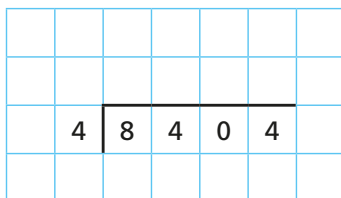
There are  groups of 3 hundreds.

There is  group of 3 tens.

There are  groups of 3 ones.

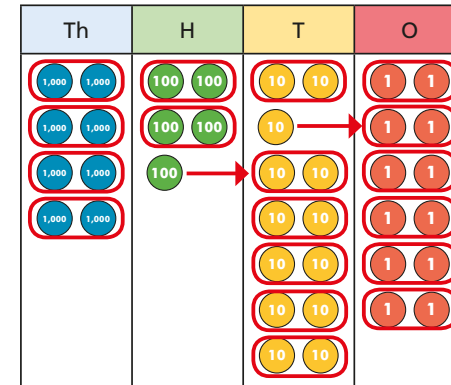
$3,936 \div 3 =$

- b) Use a place value chart to work out  $8,404 \div 4$



- 2 Use a place value chart to work out the divisions.

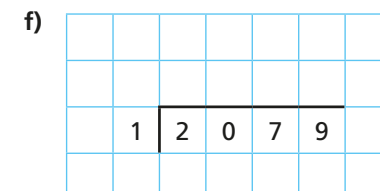
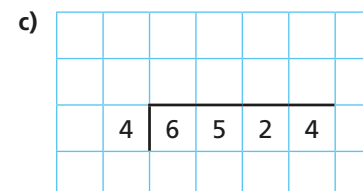
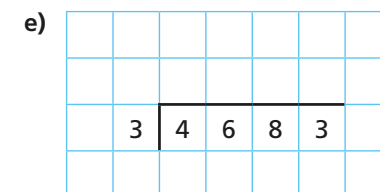
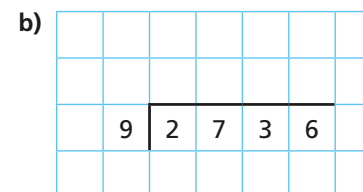
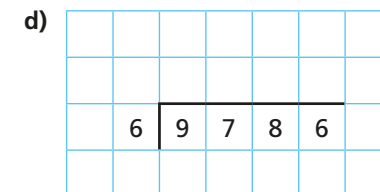
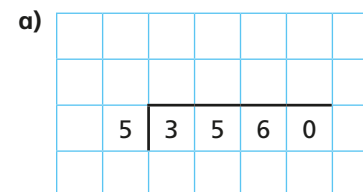
a)  $8,532 \div 2$



b)  $5,296 \div 4$

c)  $6,078 \div 6$

- 3 Complete the divisions.

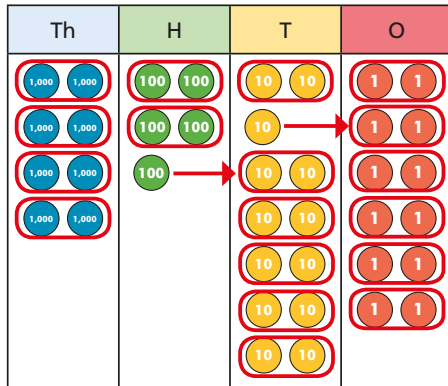


Could you have calculated the answer to part f) more efficiently?



2 Use a place value chart to work out the divisions.

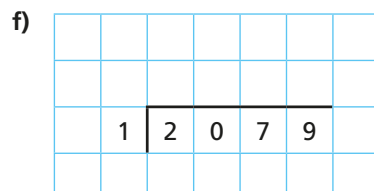
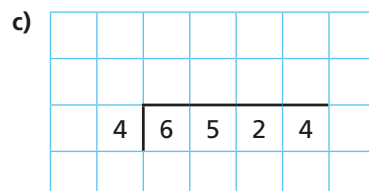
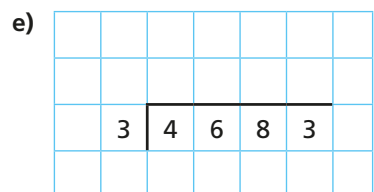
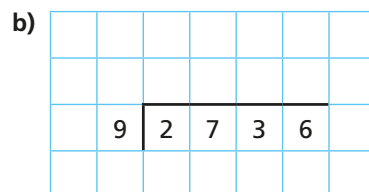
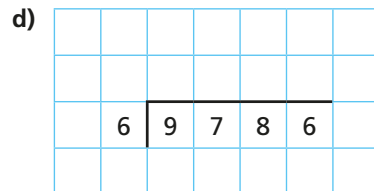
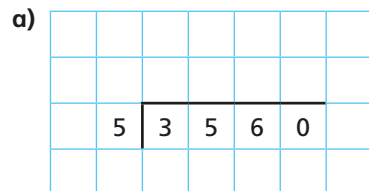
a)  $8,532 \div 2$



b)  $5,296 \div 4$

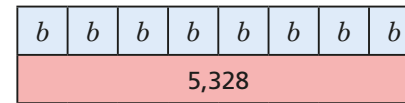
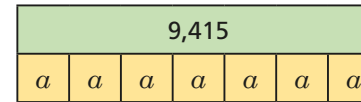
c)  $6,078 \div 6$

3 Complete the divisions.

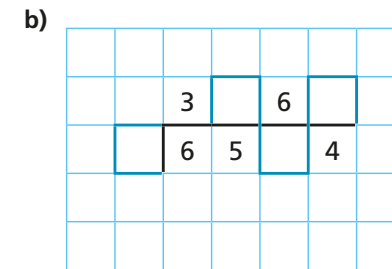
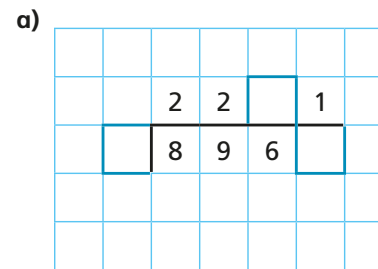


Could you have calculated the answer to part f) more efficiently?

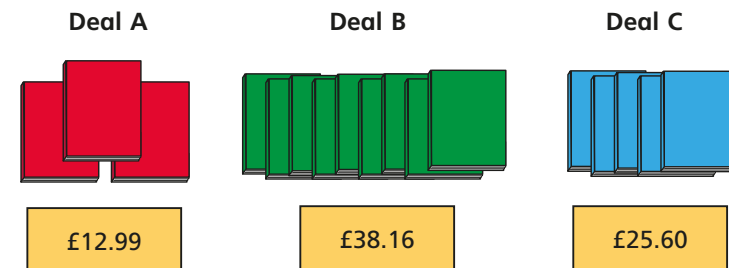
4 Work out the values of  $a$ ,  $b$  and  $c$ .



5 Find the missing digits.



6 Books are available to buy in three different deals.



Which is the best deal?  
Show your workings.