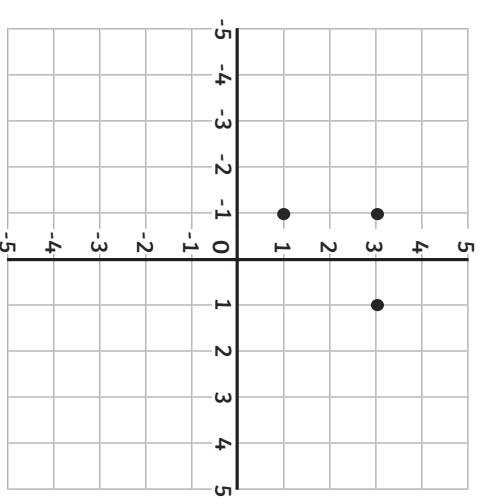


Missing Coordinate Polygons

Challenge Cards

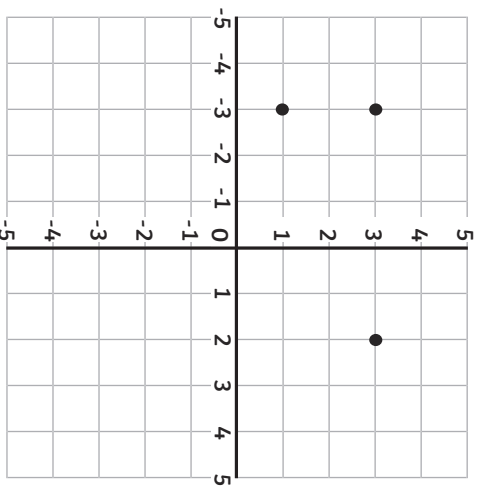


Missing Coordinate Polygons



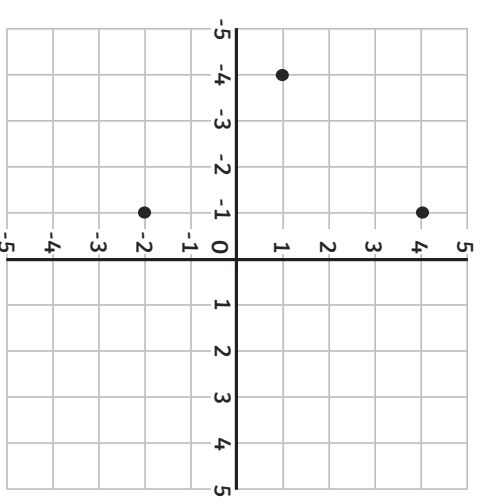
Plot the missing coordinate to make a **square**.
Complete the drawing and write the missing coordinate (,).

Missing Coordinate Polygons



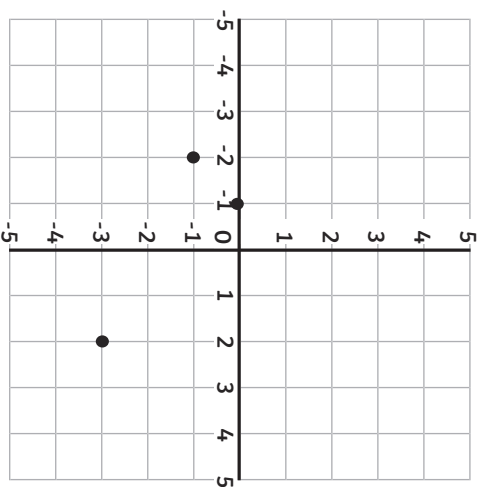
Plot the missing coordinate to make a **rectangle**.
Complete the drawing and write the missing coordinate (,).

Missing Coordinate Polygons



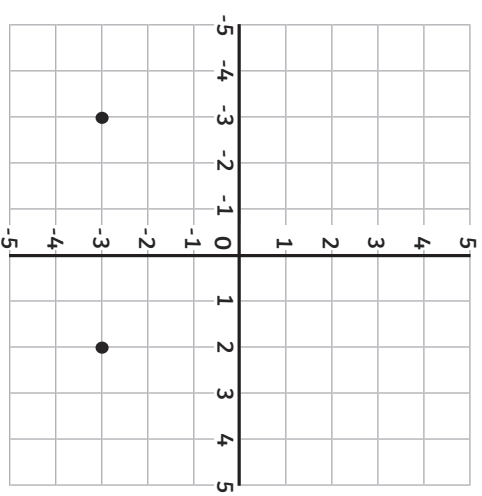
Plot the missing coordinate to make a **square**.
Complete the drawing and write the missing coordinate (,).

Missing Coordinate
Polygons



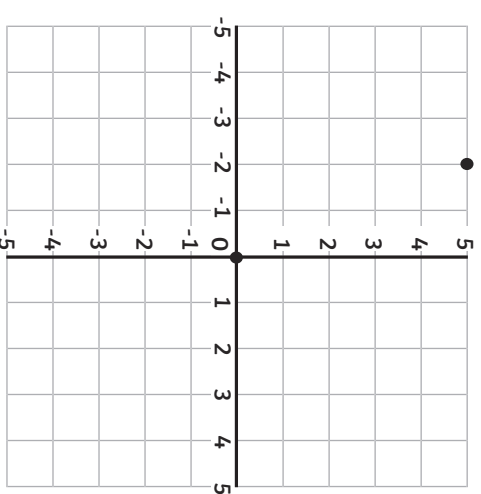
Plot the missing coordinate to make a **rectangle**.
Complete the drawing and write the missing coordinate (,).

Missing Coordinate
Polygons



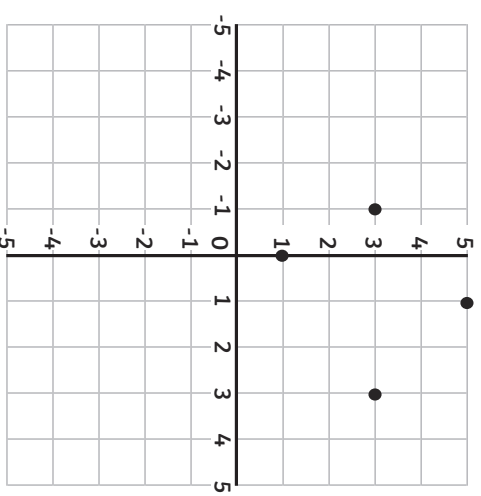
Plot the missing coordinate to make a **right-angled triangle**.
Complete the drawing and write the missing coordinate (,).

Missing Coordinate
Polygons



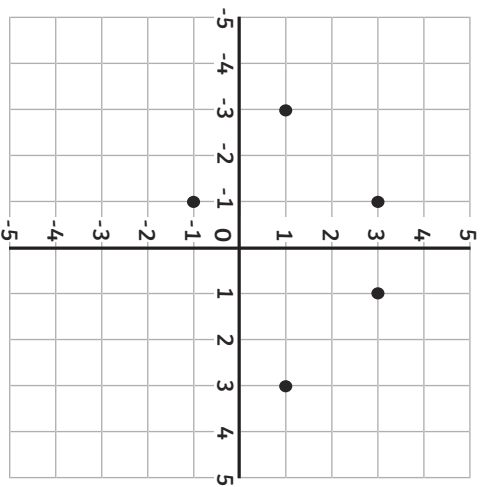
Plot the missing coordinate to make a **triangle**.
Complete the drawing and write the missing coordinate (,).

Missing Coordinate
Polygons



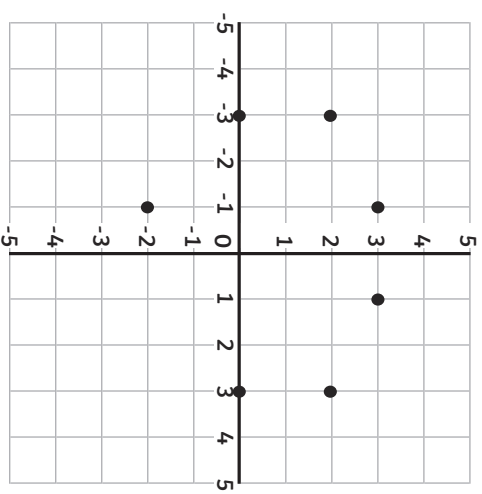
Plot the missing coordinate to make a **pentagon**.
Complete the drawing and write the missing coordinate (,).

Missing Coordinate
Polygons



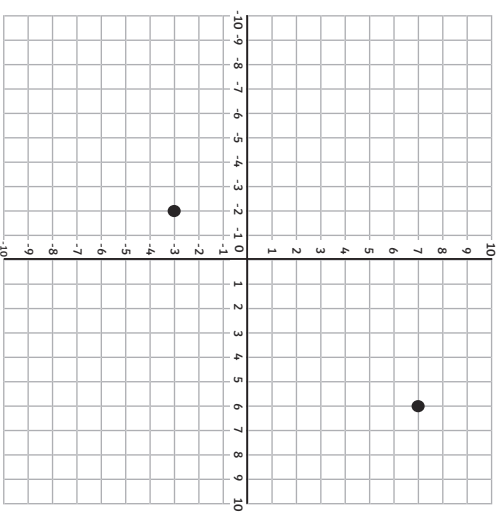
Plot the missing coordinate to make a **hexagon**.
Complete the drawing and write the missing coordinate (,).

Missing Coordinate
Polygons



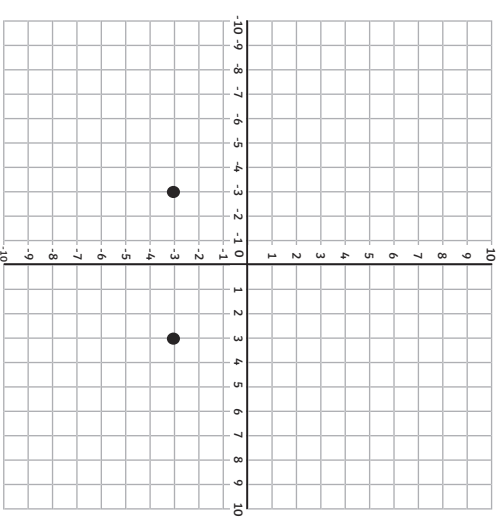
Plot the missing coordinate to make an **octagon**.
Complete the drawing and write the missing coordinate (,).

Missing Coordinate
Polygons



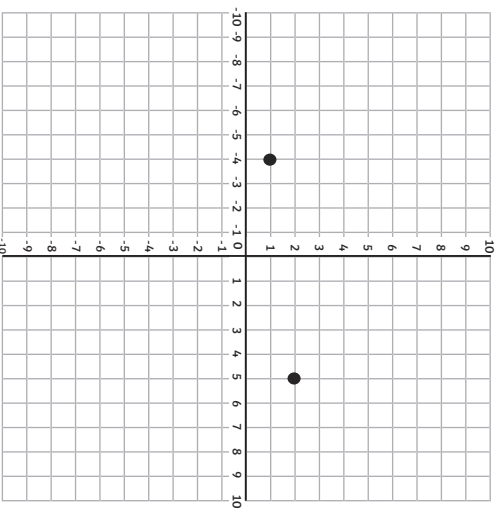
Plot the missing coordinate to make a **right-angled triangle**.
Complete the drawing and write the missing coordinate (,).

Missing Coordinate
Polygons



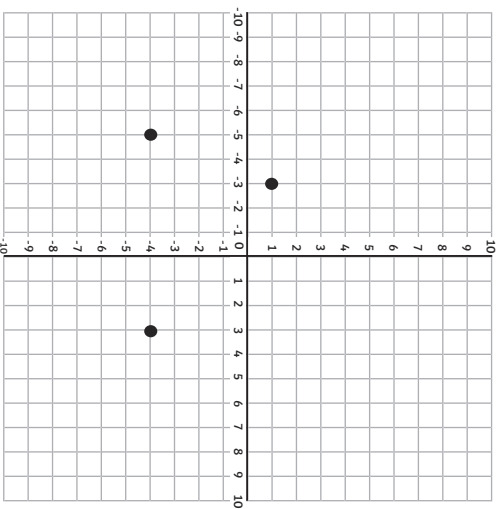
Plot the missing coordinate to make an **isosceles triangle**.
Complete the drawing and write the missing coordinate (,).

Missing Coordinate
Polygons



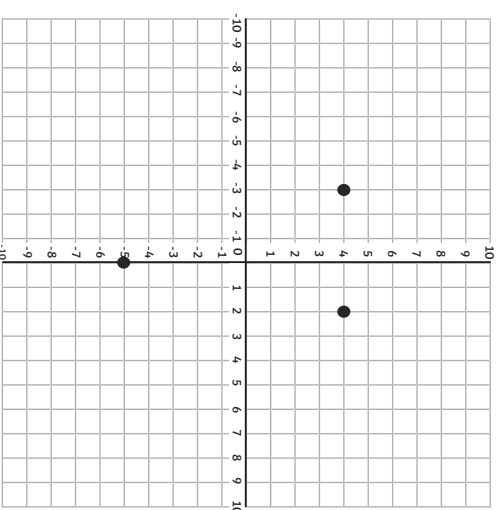
Plot the missing coordinate to make a **scalene triangle**.
Complete the drawing and write the missing coordinate (,).

Missing Coordinate
Polygons



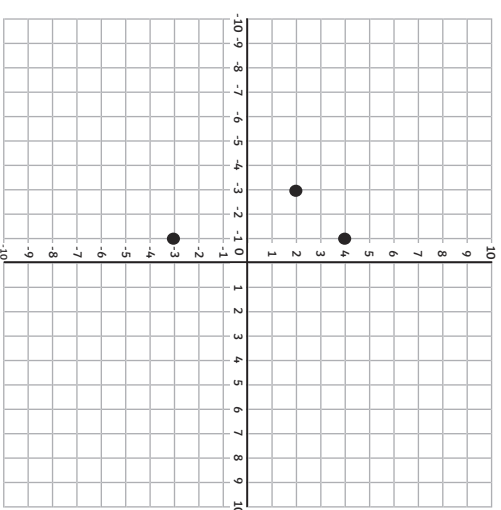
Plot the missing coordinate to make a **trapezium**.
Complete the drawing and write the missing coordinate (,).

Missing Coordinate
Polygons



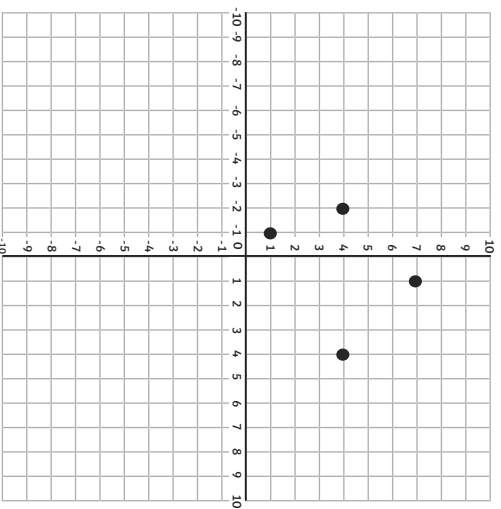
Plot the missing coordinate to make a **parallelogram**.
Complete the drawing and write the missing coordinate (,).

Missing Coordinate
Polygons



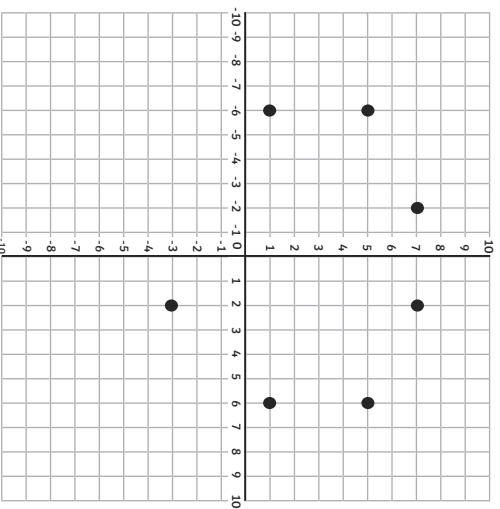
Plot the missing coordinate to make a **kite**.
Complete the drawing and write the missing coordinate (,).

Missing Coordinate Polygons



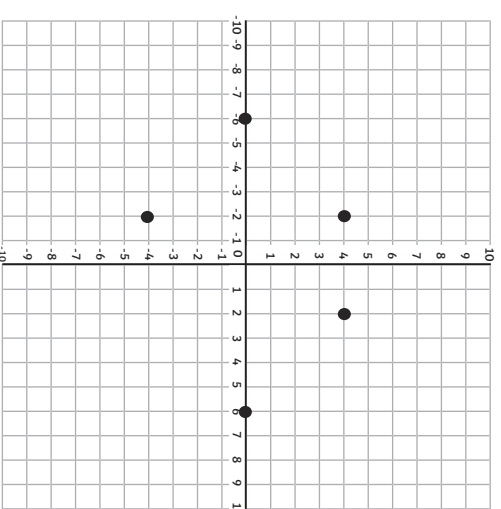
Plot the missing coordinate to make a **pentagon**.
Complete the drawing and write the missing coordinate (,).

Missing Coordinate Polygons



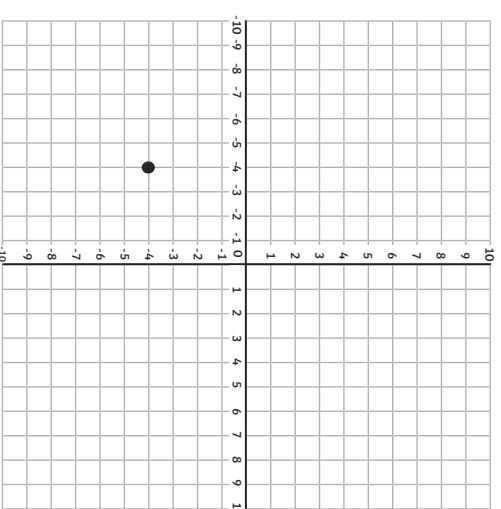
Plot the missing coordinate to make an **octagon**.
Complete the drawing and write the missing coordinate (,).

Missing Coordinate Polygons



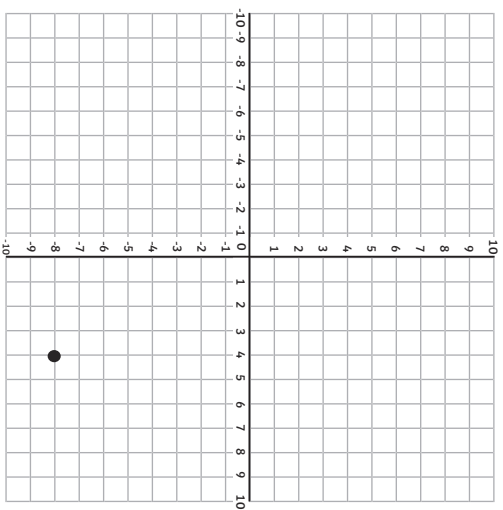
Plot the missing coordinate to make a **hexagon**.
Complete the drawing and write the missing coordinate (,).

Missing Coordinate Polygons



Plot the missing coordinates to make a **right-angled triangle**.
Complete the drawing and write the missing coordinates:
(,), (,).

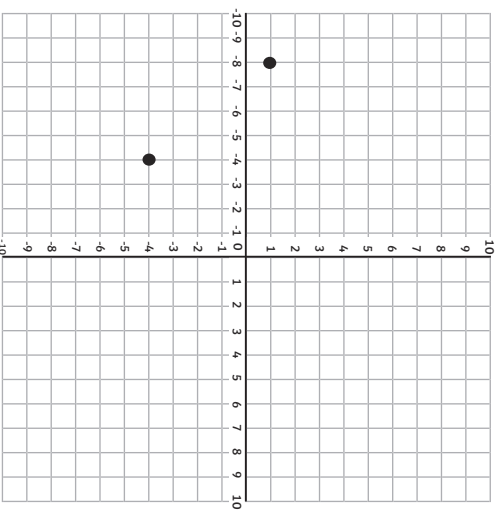
Missing Coordinate Polygons



Plot the missing coordinates to make an **isosceles triangle**.
Complete the drawing and write the missing coordinates:

(,), (,).

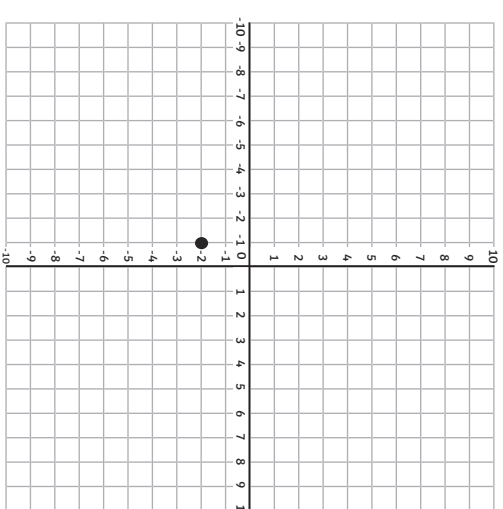
Missing Coordinate Polygons



Plot the missing coordinates to make a **parallelogram**.
Complete the drawing and write the missing coordinates:

(,), (,).

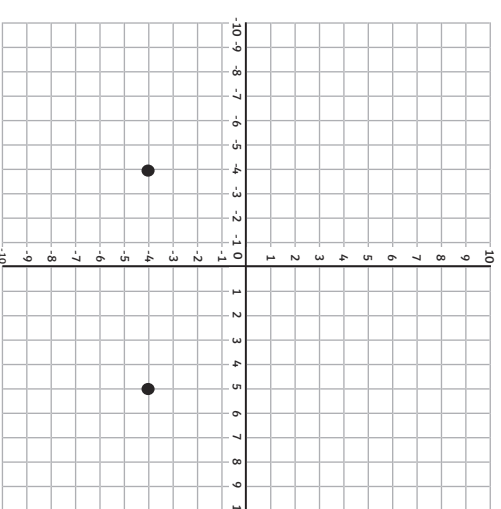
Missing Coordinate Polygons



Plot the missing coordinates to make a **scalene triangle**.
Complete the drawing and write the missing coordinates:

(,), (,).

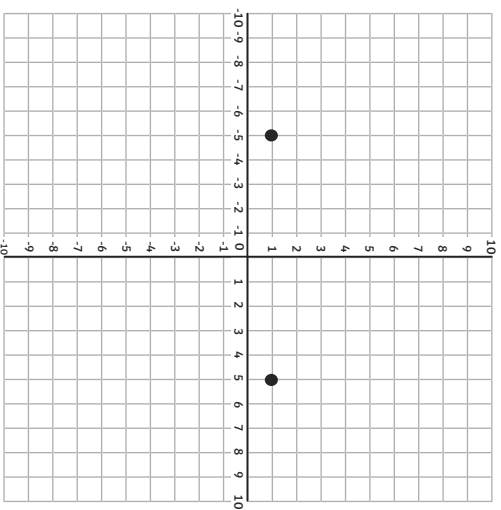
Missing Coordinate Polygons



Plot the missing coordinates to make a **trapezium**.
Complete the drawing and write the missing coordinates:

(,), (,).

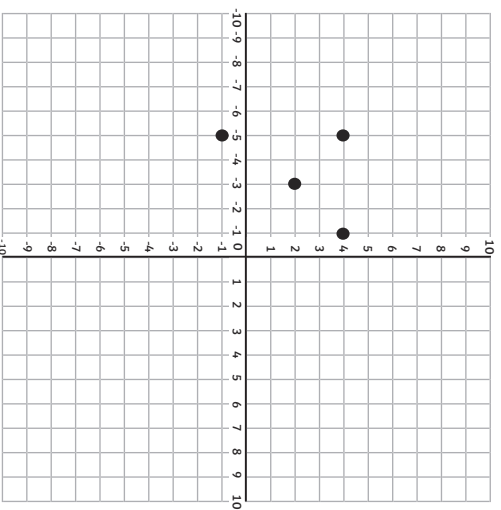
Missing Coordinate Polygons



Plot the missing coordinates to make a **kite**.

Complete the drawing and write the missing coordinates:
(,), (,).

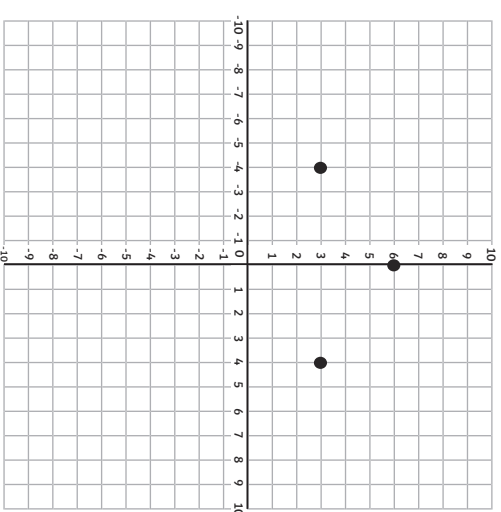
Missing Coordinate Polygons



Plot the missing coordinates to make a **hexagon**.

Complete the drawing and write the missing coordinates:
(,), (,).

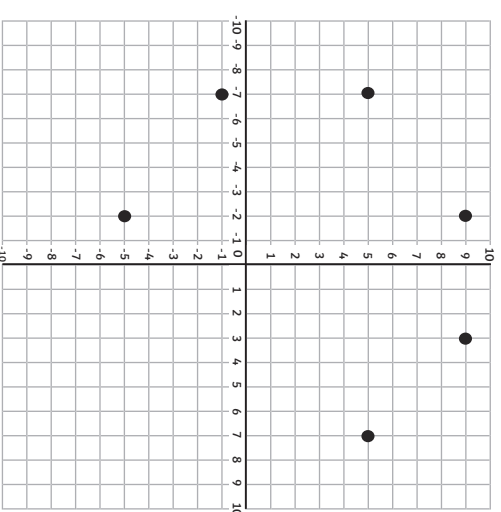
Missing Coordinate Polygons



Plot the missing coordinates to make a **pentagon**.

Complete the drawing and write the missing coordinates:
(,), (,).

Missing Coordinate Polygons



Plot the missing coordinates to make an **octagon**.

Complete the drawing and write the missing coordinates:
(,), (,).

