

# Identifying numbers up to 10 000

Maths worksheets from [urbrainy.com](http://urbrainy.com)

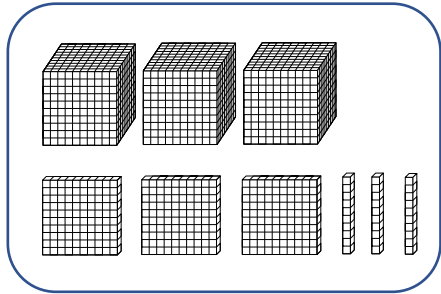
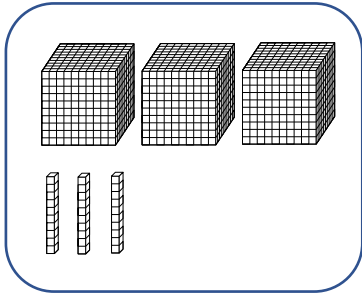
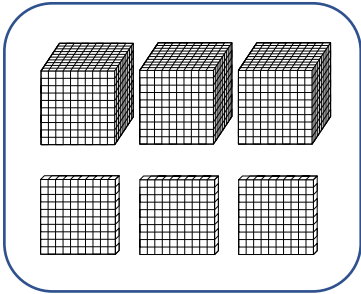


Please help me to match these numbers to the diagrams.


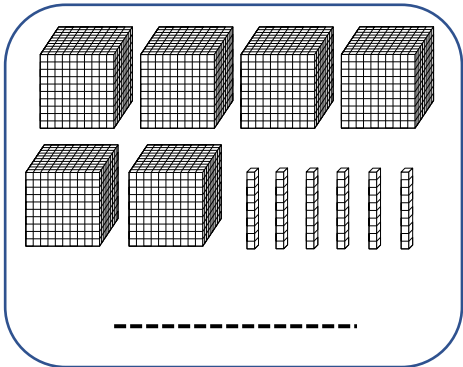
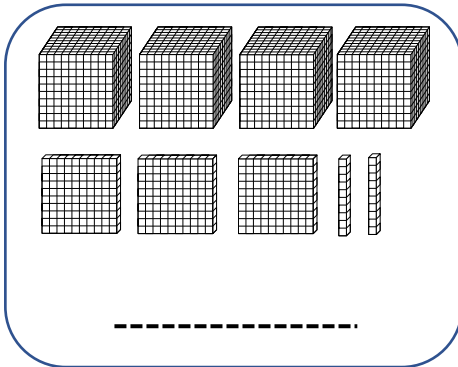
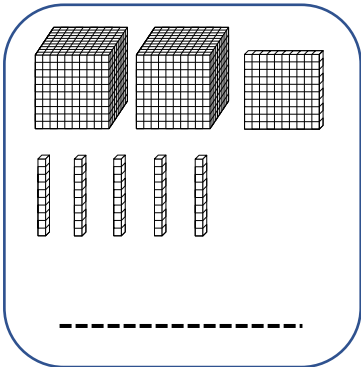
3 330

3 300

3 030



What numbers do the following diagrams represent?  
Write the answers below.



Now, please can you complete the table below.

	add 10	add 100	add 1 000
2 109			
6 896			
7 752			
1 908			
3 687			
4 916			

# Identifying numbers up to 10 000

Maths worksheets from urbrainy.com

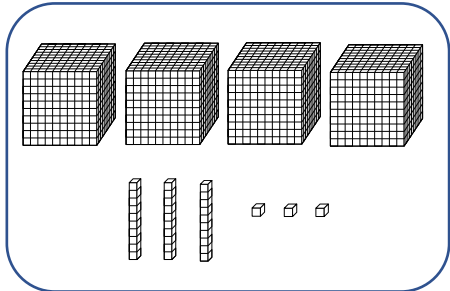
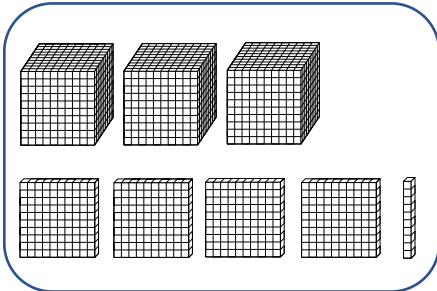
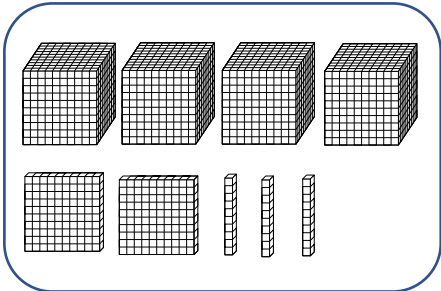


Please help me to match these numbers to the diagrams.


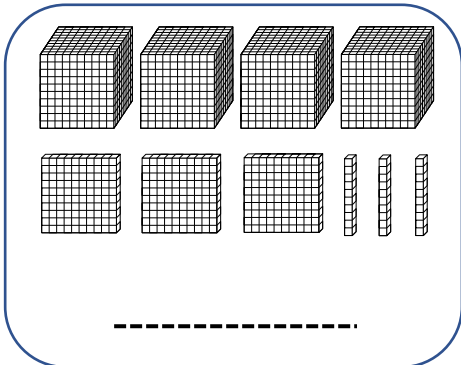
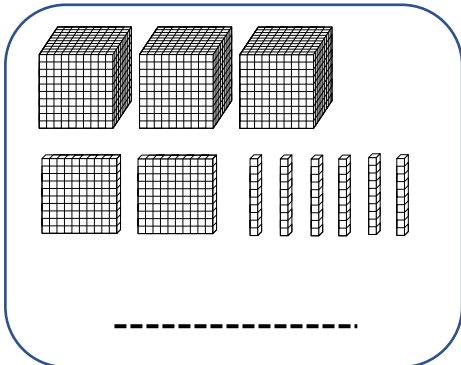
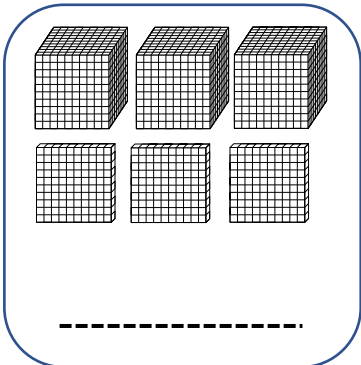

3 410

4 033

4 230



What numbers do the following diagrams represent?  
Write the answers below.



Now, please can you complete the table below.

	add 10	add 100	add 1 000
8 012			
6 986			
2 577			
8 019			
7 863			
6 194			

# Identifying numbers up to 10 000

Maths worksheets from [urbrainy.com](http://urbrainy.com)

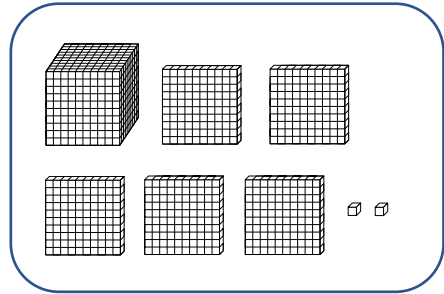
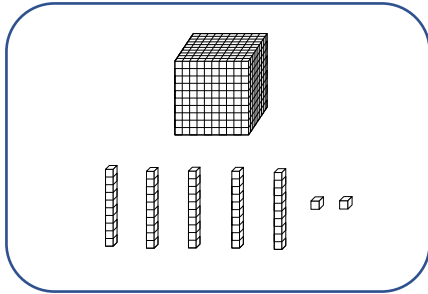
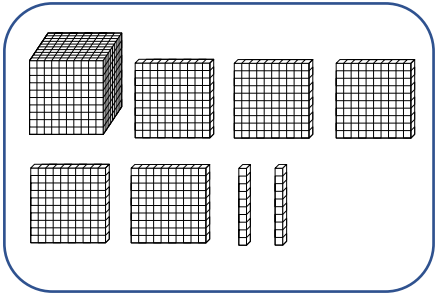


Please help me to match these numbers to the diagrams.


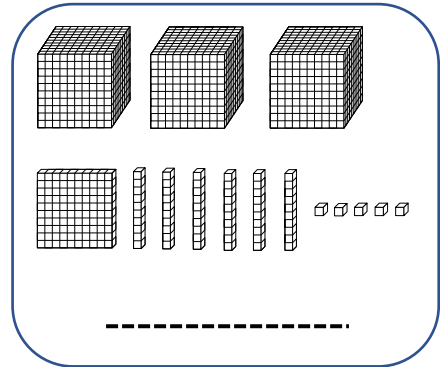
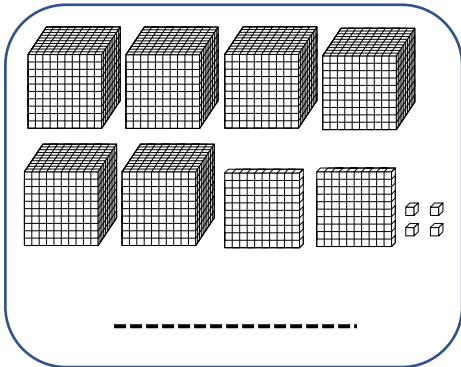
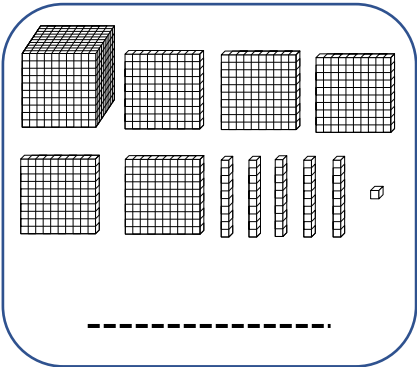

1 520

1 502

1 052



What numbers do the following diagrams represent?  
Write the answers below.



Now, please can you complete the table below.

	add 10	add 100	add 1 000
1 029			
8 966			
5 792			
2 081			
6 387			
8 491			

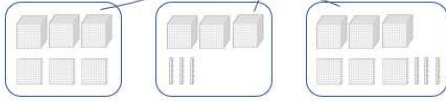
Answers:

## Page 1

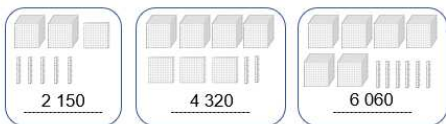
Identifying numbers up to 10 000  
Maths worksheets from [urbrainy.com](http://urbrainy.com)

Please help me to match these numbers to the diagrams.

3 330    3 300    3 030



What numbers do the following diagrams represent?  
Write the answers below.



2 150    4 320    6 060

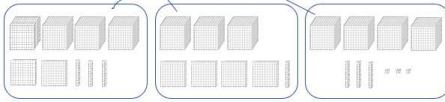
	add 10	add 100	add 1 000
2 109	2 119	2 209	3 109
6 896	6 906	6 996	7 896
7 752	7 762	7 852	8 752
1 908	1 918	2 008	2 908
3 687	3 697	3 787	4 687
4 916	4 926	5 016	5 916

## Page 2

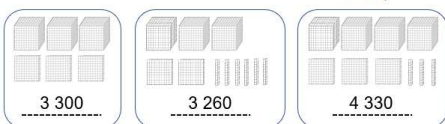
Identifying numbers up to 10 000  
Maths worksheets from [urbrainy.com](http://urbrainy.com)

Please help me to match these numbers to the diagrams.

3 410    4 033    4 230



What numbers do the following diagrams represent?  
Write the answers below.



3 300    3 260    4 330

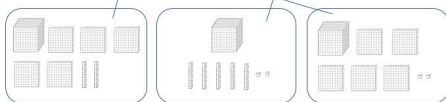
	add 10	add 100	add 1 000
8 012	8 022	8 112	9 012
6 986	6 996	7 086	7 986
2 577	2 587	2 677	3 577
8 019	8 029	8 119	9 019
7 863	7 873	7 963	8 863
6 194	6 204	6 294	7 194

## Page 3

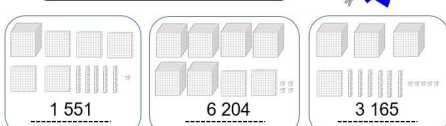
Identifying numbers up to 10 000  
Maths worksheets from [urbrainy.com](http://urbrainy.com)

Please help me to match these numbers to the diagrams.

1 520    1 502    1 052



What numbers do the following diagrams represent?  
Write the answers below.



1 551    6 204    3 165

	add 10	add 100	add 1 000
1 029	1 039	1 129	2 029
8 966	8 976	9 066	9 966
5 792	5 802	5 892	6 792
2 081	2 091	2 181	3 081
6 387	6 397	6 487	7 387
8 491	8 501	8 591	9 491

Name: \_\_\_\_\_