



1) Complete the table showing the metric measurement units and abbreviations:


Length	millimetre (mm)
	_____ (cm)
	metres (_____)
	_____ (_____)
Mass	_____ (g)
	_____ (_____)
	_____ (t)
Capacity and Volume	_____ (ml)
	_____ (_____)

2) Give the most appropriate unit of measurement:

- height of a door \_\_\_\_\_
- volume of water in a glass \_\_\_\_\_
- length of a pencil point \_\_\_\_\_
- mass of a person \_\_\_\_\_
- length of a reading book \_\_\_\_\_
- mass of a rubber \_\_\_\_\_


3) Tick the best estimation for each question.

a)




- 5kg
- 5 tonnes
- 500g
- 0.05 tonnes

b)



- 2ml
- 2l
- 20l
- 0.2l

c)



- 18m
- 1.8m
- 18mm
- 18 000cm

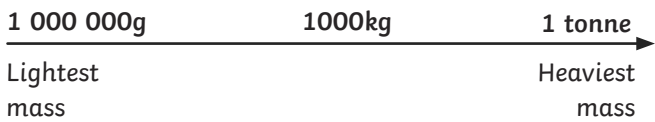


1)

1 000 000g = 1000kg = 1 tonne

Hamza and Megan have ordered the masses incorrectly on the diagrams below. Explain why you think they chose to order the masses in that way.

**Hamza**




---

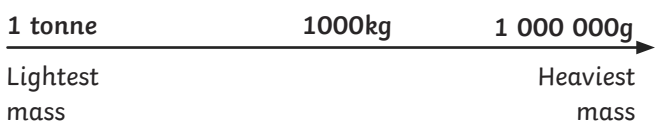
---

---

---

---

**Megan**




---

---

---

---

---

2) Are these statements always, sometimes or never true? Prove it!

a) A distance measured in kilometres is longer than a distance measured in metres.

---

---



b) An empty bottle has a capacity of 1l. The same bottle, when half full, has a volume of 1l.

---

---



c) The mass of a mouse will be shown in grams.

---

---

