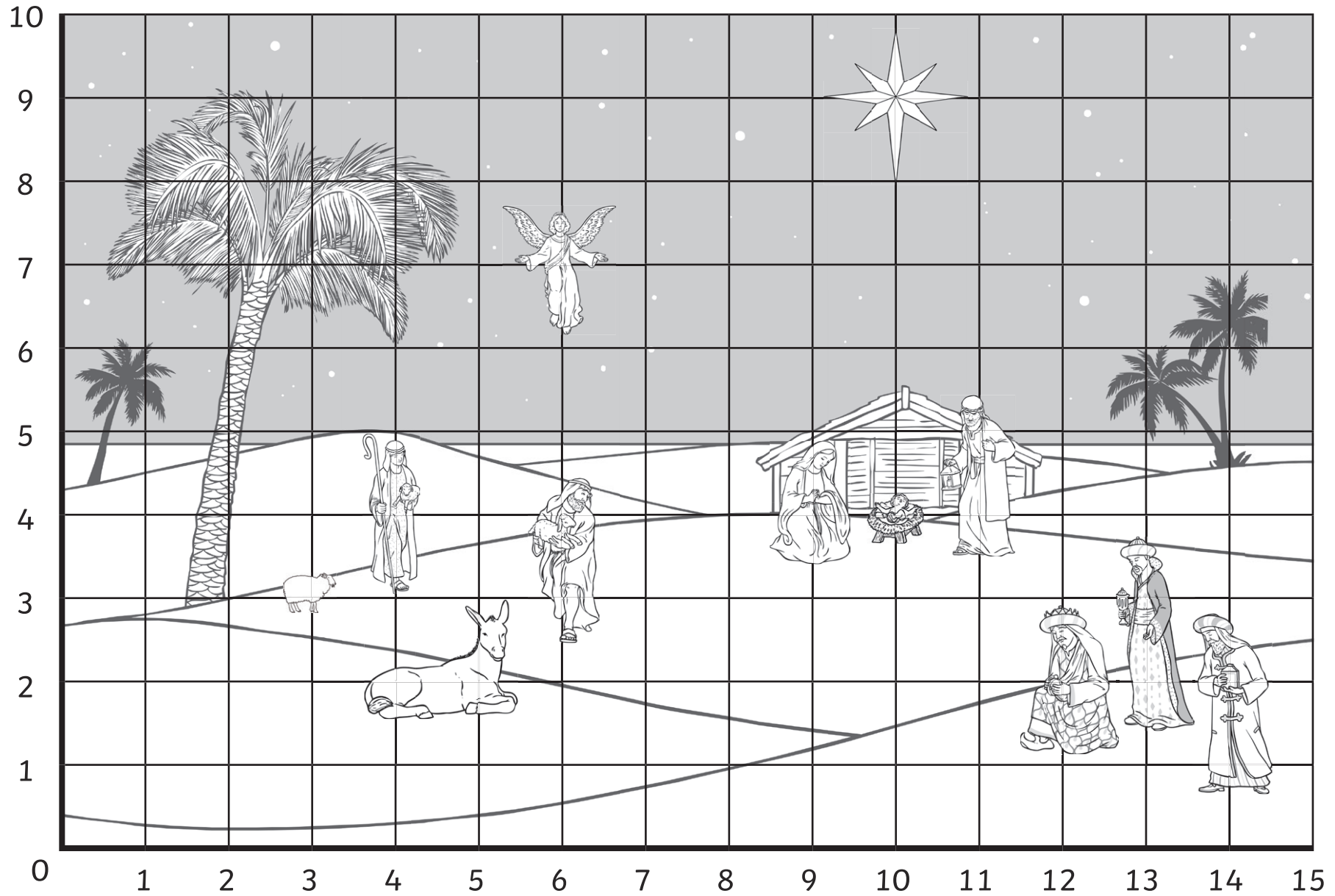


# Christmas Coordinates



# Christmas Coordinates

Aim: To describe positions on a 2D grid as coordinates in the first quadrant and plot specified points.

1. Write down the coordinates of these objects:



2. Write down what you can see at the coordinates below:

a) (6, 7) \_\_\_\_\_

b) (9, 4) \_\_\_\_\_

c) (12, 2) \_\_\_\_\_

3. Draw a gift for baby Jesus at (10, 3).

# Christmas Coordinates Answers

Aim: To describe positions on a 2D grid as coordinates in the first quadrant and plot specified points.

1. Write down the coordinates of these objects:



2. Write down what you can see at the coordinates below:

a) (6, 7) angel

b) (9, 4) Mary

c) (12, 2) wise man

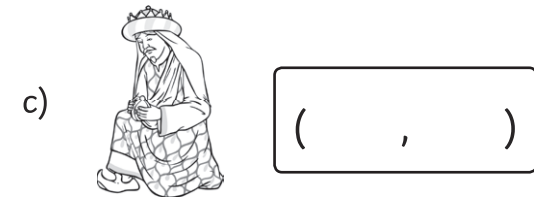
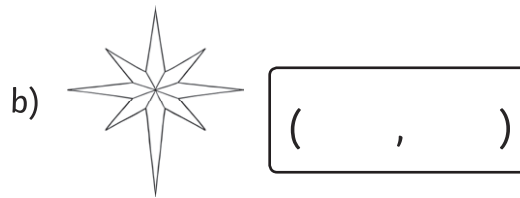

3. Draw a gift for baby Jesus at (10, 3).

**A gift drawn on the correct coordinate.**

# Christmas Coordinates

Aim: To describe positions on a 2D grid as coordinates in the first quadrant and plot specified points.

1. Write down the coordinates of these objects:



2. Write down what you can see at the coordinates below:

a) (4, 4) \_\_\_\_\_

b) (10, 4) \_\_\_\_\_

c) (4, 2), (5, 2) \_\_\_\_\_

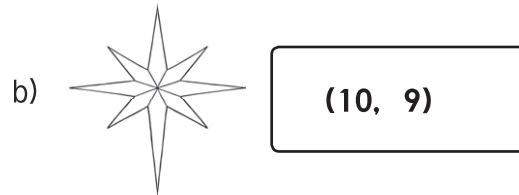

d) (14, 1), (14, 2) \_\_\_\_\_

3. Draw a camel across (13, 4) and (14, 4).

# Christmas Coordinates Answers

Aim: To describe positions on a 2D grid as coordinates in the first quadrant and plot specified points.

1. Write down the coordinates of these objects:



2. Write down what you can see at the coordinates below:

- a) (4, 4) shepherd
- b) (10, 4) Jesus
- c) (4, 2), (5, 2) donkey
- d) (14, 1), (14, 2) wise man

3. Draw a camel across (13, 4) and (14, 4)

**A camel drawn across the correct coordinates.**

# Christmas Coordinates

Aim: To describe positions on a 2D grid as coordinates in the first quadrant and plot specified points.

1. Write down the coordinates of these objects:



(     ,     )



(     ,     )



(     ,     )

(     ,     )

2. On which 6 coordinates is the stable located?

(     ,     )

(     ,     )

(     ,     )

(     ,     )

(     ,     )

(     ,     )

3. Write down what you can see at the coordinates below:

a) (12, 2) \_\_\_\_\_

b) (11, 4), (11, 5) \_\_\_\_\_

c) (6,3), (6, 4) \_\_\_\_\_


d) (10, 9) \_\_\_\_\_

4. Draw an angel across the coordinates (13, 9), (14, 9), (13, 8), (14, 8), (13, 7), (14, 7).

# Christmas Coordinates Answers

Aim: To describe positions on a 2D grid as coordinates in the first quadrant and plot specified points.

1. Write down the coordinates of these objects:



(4, 4)



(6, 7)



(13, 2)

(13, 3)

2. On which 6 coordinates is the stable located?

(9, 4)

(9, 5)

(10, 4)

(10, 5)

(11, 4)

(11, 5)

3. Write down what you can see at the coordinates below:

a) (12, 2)

wise man

b) (11, 4), (11, 5)

Joseph

c) (6,3), (6, 4)

shepherd

d) (10, 9)

star

4. Draw an angel across the coordinates (13, 9), (14, 9), (13, 8), (14, 8), (13, 7), (14, 7).

**An angel drawn across the correct coordinates.**