

Progress check

Year 4

Mathematics

Paper 1: arithmetic

First name						
Middle name						
Last name						
Date of birth	Day		Month		Year	
Teacher						

These assessments have been designed by White Rose Maths.
For more information, please visit www.whiterosemaths.com



[BLANK PAGE]

Please do not write on this page.

Instructions

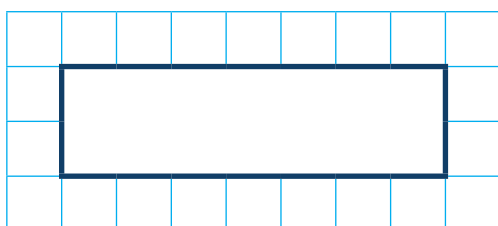
You **may not** use a calculator to answer any questions in this test.

Questions and answers

You have **20 minutes** to complete this test.

Work as quickly and as carefully as you can.

Put your answer in the box for each question.

A grid of 10 columns and 4 rows of small squares. In the center of the grid, there is a larger rectangular box with a thick black border, spanning 6 columns and 2 rows.

If you cannot do one of the questions, **go on to the next one**.

You can come back to it later, if you have time.

If you finish before the end, **go back and check your work**.

Marks

The number under each box at the side of the page tells you the maximum number of marks for each question.

1

$$248 + 100 =$$

1 mark

2

$$10 \text{ less than } 729 =$$

1 mark

3

$$7 \times 11 =$$

A large grid of 20 columns and 10 rows of small squares, intended for writing the answer to the multiplication problem.

1 mark

4

$$48 \div 4 =$$

A large grid of 20 columns and 10 rows of small squares, intended for writing the answer to the division problem.

1 mark

5

$$1,245 + 324 =$$

1 mark

6

$$795 - 541 =$$

1 mark

7

$3 \times 5 \times 2 =$

1 mark

8

$9 \div \boxed{} = 9$

1 mark

9

$$2,384 + 3,096 =$$

A large grid of 20 columns and 15 rows, intended for students to show their working out for the addition problem above.

1 mark

10

$$1,300 = \boxed{} + 1,289$$

A large grid of 20 columns and 15 rows, intended for students to show their working out for the subtraction problem above.

1 mark

11

$$4 \times 60 =$$

1 mark

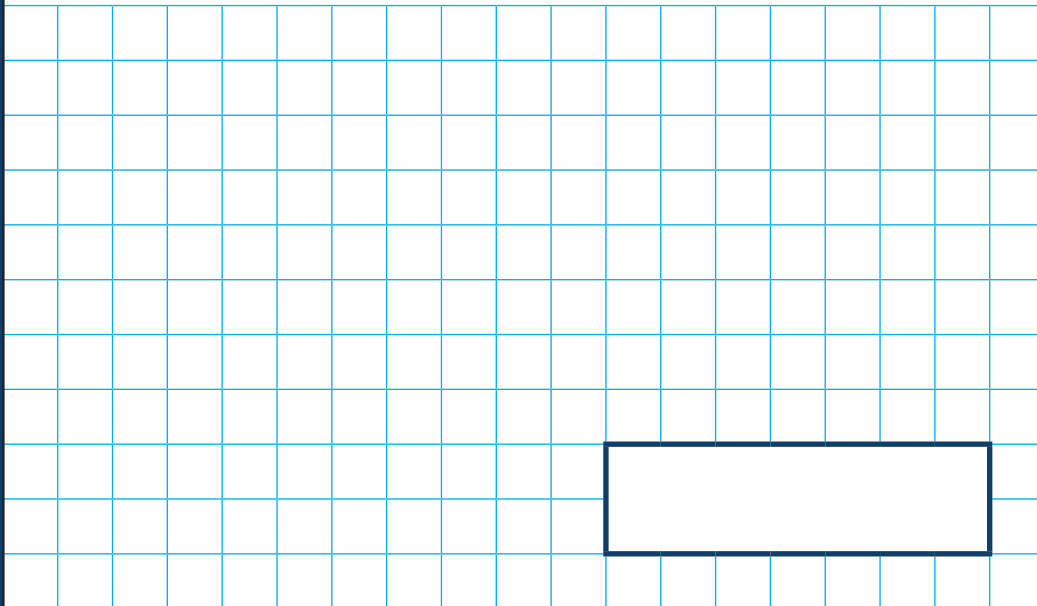
12

$$7,395 - 2,470 =$$

1 mark

13

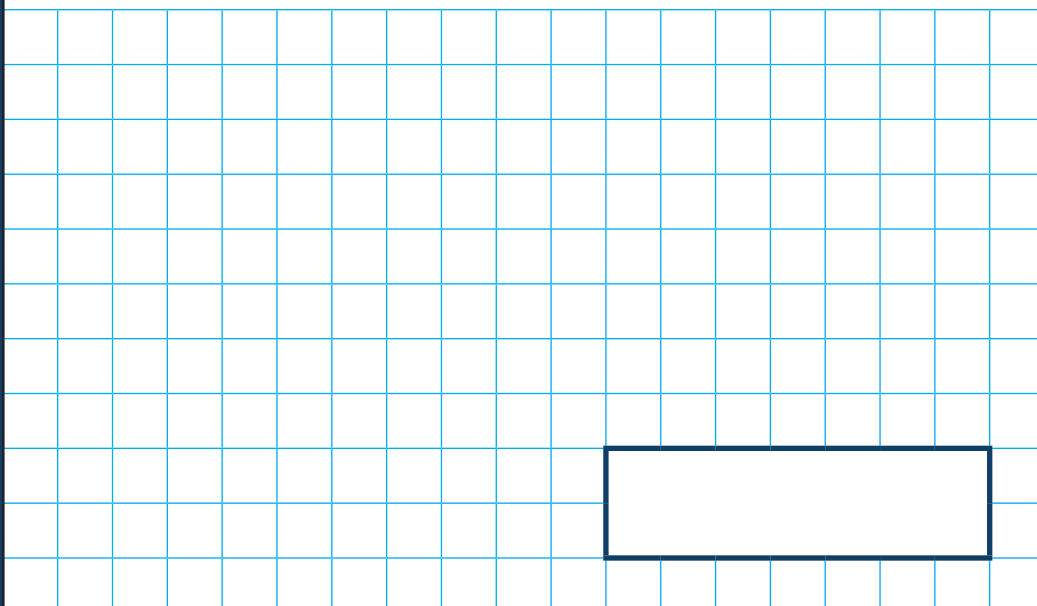
4,598 rounded to the nearest 10 is



1 mark

14

$80 \div 2 =$



1 mark

15

$$9,000 - 6,346 =$$

A large grid of 20 columns and 15 rows, intended for students to show their working out for the subtraction problem.

1 mark

16

$$8 \times \boxed{} = 72$$

A large grid of 20 columns and 15 rows, intended for students to show their working out for the multiplication problem.

1 mark

17

$\div 6 = 12$

1 mark

18

$5,623 + 1,000 - 100 =$

1 mark

19

$$40 \div 5 = \boxed{} \times 2$$

1 mark

20

$$4,500 + 776 + 95 =$$

1 mark

[BLANK PAGE]

Please do not write on this page.

[BLANK PAGE]

Please do not write on this page.

[BLANK PAGE]

Please do not write on this page.