

Order of operations



1 Represent each calculation. Draw your answers.

a) $(3 + 2) \times 3$

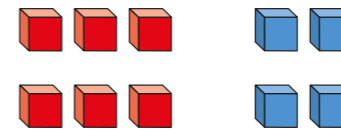
b) $3 + (2 \times 3)$

c) $2 + 3 \times 3$

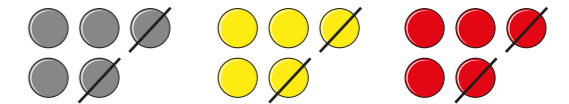
d) $3 \times (2 \times 3)$

2 Complete the calculations.

a) $(3 + \square) \times 2$



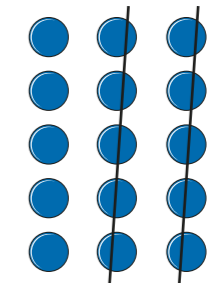
c) $(\square - \square) \times 3$



b) $\square + 2 \times \square$

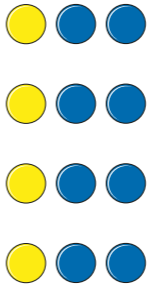


d) $15 - (\square \times \square)$



3 Draw a representation to match each calculation.

One has been done for you.

$4 \times (1 + 2)$ 	$4 \times 2 + 1$
$(10 - 3) \times 2$	$10 - 3 \times 2$



4 Insert brackets to make the calculations correct.

$5 + 5 \times 5 = 50$	$100 - 100 \div 10 = 0$
$75 = 20 + 5 \times 1\frac{1}{2} + 1\frac{1}{2}$	$10 - 10 \times 10 = 50 + 50 - 100$

5 Insert operations and brackets to make as many different numbers as you can.

One has been done for you.

$$(4 + 4) \times 4 = 32 \qquad 3 \quad 3 \quad 3 \quad 3 = \boxed{}$$

$$4 \quad 4 \quad 4 = \boxed{} \qquad 3 \quad 3 \quad 3 \quad 3 = \boxed{}$$

$$4 \quad 4 \quad 4 = \boxed{} \qquad 3 \quad 3 \quad 3 \quad 3 = \boxed{}$$

$$4 \quad 4 \quad 4 = \boxed{} \qquad 3 \quad 3 \quad 3 \quad 3 = \boxed{}$$

$$4 \quad 4 \quad 4 = \boxed{} \qquad 3 \quad 3 \quad 3 \quad 3 = \boxed{}$$

$$4 \quad 4 \quad 4 = \boxed{} \qquad 3 \quad 3 \quad 3 \quad 3 = \boxed{}$$

$$4 \quad 4 \quad 4 = \boxed{} \qquad 3 \quad 3 \quad 3 \quad 3 = \boxed{}$$

6 Dora saves £100 and is given £25 by her gran.

She buys 7 books, each costing £5 and 7 pens each costing £2
Write a calculation with brackets to work out how much money Dora has left.

7 King Lear owned 48 counties.

He shared them equally between his three daughters.
One of the daughters gave 15 of her counties away.
Write a calculation to show how many counties she kept.

8 Write a story problem for each calculation.

a) $(1,000 - 250) \div 5$

b) $1,000 - 250 \div 5$
