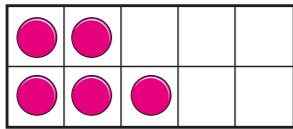
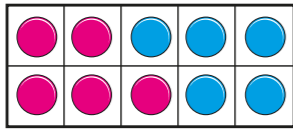


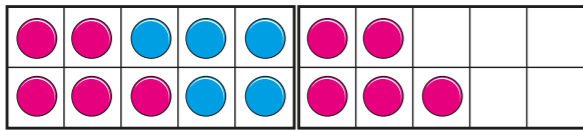
1 What numbers are represented?




5



10



15

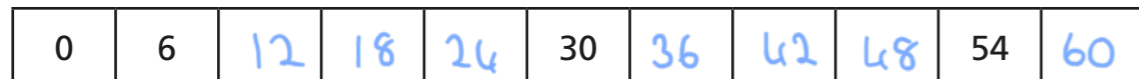


20

Complete the sentence.

These numbers are all multiples of 5

2 Complete the number track.



3 a) List all the multiples of 2 up to 20

2, 4, 6, 8, 10, 12, 14, 16, 18, 20

b) List all the multiples of 4 up to 20

4, 8, 12, 16, 20

c) What do you notice about the multiples of 2 and 4?

d) Is the number 47 a multiple of 4? No

Explain how you know.

All multiples of 4 are even.

4 a) Circle all the multiples of 3

23

6

13

18

21

32

b) The table shows four more multiples of 3

Multiple of 3	75	126	432	9,735
Sum of the digits	<u>12</u>	<u>9</u>	<u>9</u>	<u>24</u>

What do you notice about the sum of the digits in each number?

They are multiples of 3

5 Multiples of 5 always have a 5 in the number.

Is the statement true or false? false

Explain your answer.

10 is a multiple of 5 and  
doesn't have a 5 in the number.

6 Which number is the odd one out?

Tick your answer.

Various  
answers e.g.

8	56	6	16
---	----	---	----

Explain to a partner why it is the odd one out.

7 Here is part of a hundred square.

11	12	13	14	15	16	17	18	19	20
21	22	23	24	25	26	27	28	29	30
31	32	33	34	35	36	37	38	39	40

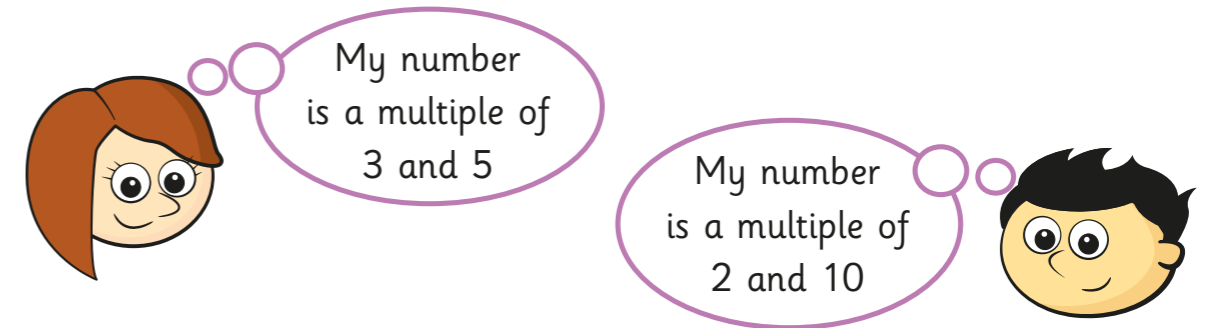
a) Colour the multiples of 3

b) Draw a circle around all the multiples of 2

c) Some numbers have been coloured **and** circled.

What do you notice about these numbers?

8 Rosie and Jack are each thinking of a number.



Could they be thinking of the same number? Yes

Explain your answer.

They could be thinking of 30, 60 etc.

9 Scott's age is a multiple of 8 and 12

His age is one away from a multiple of 7

He is younger than 50 years old.

How old is Scott?

48

10 Write the multiples of 15 between 250 and 350

255 270 285 300 315 330 345

Compare answers with a partner to make sure you have them all.