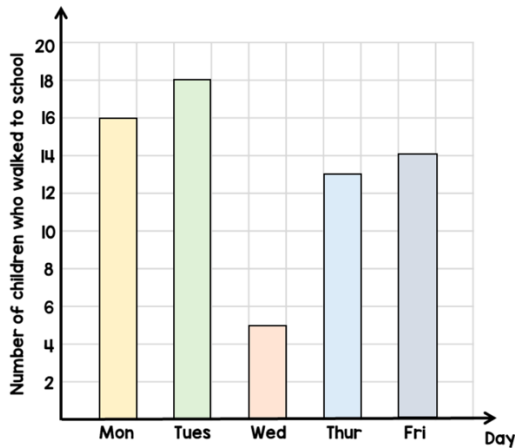


1. There are 25 children in a class. The bar chart shows the number of children in the class who walk to school each day.



- (a) What percentage of the class walked to school on Thursday?
- (b) One of the days it rained. Which day do you think it was? Explain to your friend.

3. Tommy thinks of a number.

5 is a factor of my number



Does Tommy's number have to be odd? Explain your answer.

5. Order the following numbers. Start with the smallest.

3.1

$\frac{18}{5}$

$3\frac{1}{4}$

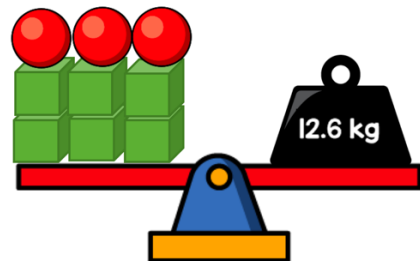
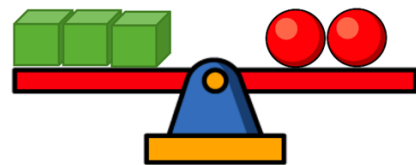
2. Workers in a factory make toys.

- On Monday they make 2,350 toys.
- On Tuesday they make 235 more toys than they did on Monday.

By Wednesday they have to make 7,500 toys in total.

How many toys do they need to make on Wednesday to make 7,500 in total?

4. Gina balances some scales.



What is the mass of a cube?

- 6.




Carrots  
£1.80 per kg

How much does 250 g of carrots cost?

7.

The cost of a pineapple is half the cost of a melon.



£3.50 each

How much does the pineapple and melon cost altogether?

8.



Parsnips  
£2.60 per kg

How much does 300 g of parsnips cost?