

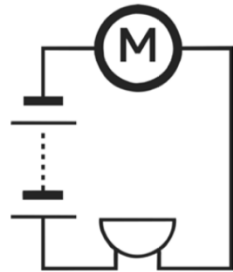
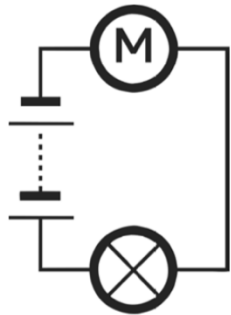


# Interpreting and Drawing Circuit Diagrams

I can recognise and draw scientific circuit symbols.

Look at the circuits below and label each part.



Draw the following circuit using the scientific circuit symbols.

1. Circuit should contain: a bulb, a cell and an open switch.
2. Circuit should contain: a battery and two motors.
3. Circuit should contain: a buzzer, two batteries and a closed switch.