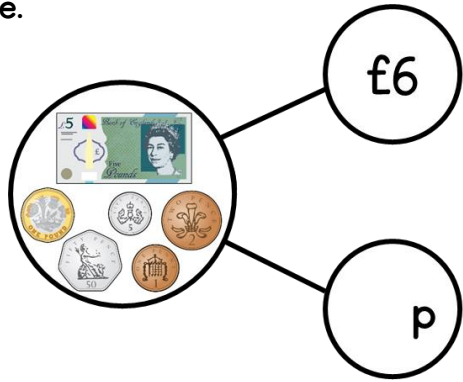


Year 4

Money

Name _____

1 Complete.



£6 + _____ p = £ _____

2 marks

2 Circle the notes and coins needed to make £8.74



1 mark

3 Whitney has this money in her purse.



Circle the item she can buy.



£8.99



£9.49





£9.99



1 mark

4



Draw an arrow to show where each coin would go so that each box has the same total.



1 mark

5 Use $>$, $<$ or $=$ to complete.

£3.46 £3.40

£12.28 12 pounds and 82p

Nine pounds and seventy pence



3 marks

6 Here is a receipt.

Estimate the total cost.

Receipt	
Pasta.....	£1.05
Tomatoes	75p
Bread	£2.25
Ice-cream	£2.99
Total	

Estimated total cost: £ _____

2 marks

7 Dora has £12.35

Alex has twelve pounds and five pence

Tommy has



Order the children from least to most money.

_____ least _____ most _____

2 marks

What is the difference between Tommy's money and Alex's money?

1 mark

8 Rosie saves 6 fifty pence pieces on Monday. She saves 3 twenty pence pieces on Tuesday. She saves 2 two pound coins on Wednesday. How much has she saved altogether?

£ _____

2 marks

Circle how confident you feel with money.

1 2 3 4 5
Not Very
confident confident