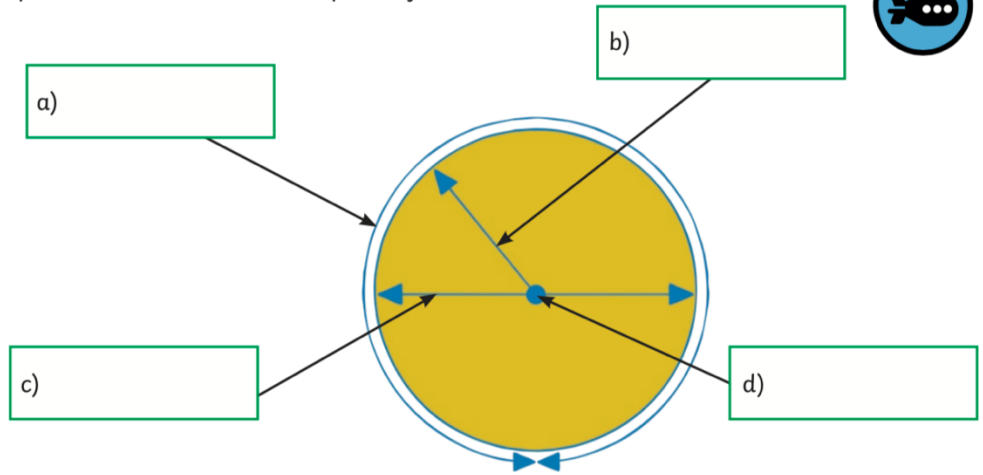




1) Use the words below to complete the labels to show the parts of a circle.

- radius
- diameter
- centre
- circumference

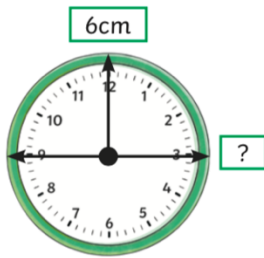


2) Complete these sentences

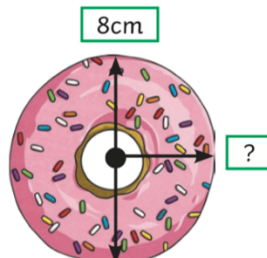
The diameter of a circle is _____ the length of the radius.

The radius of a circle is _____ the length of the diameter.

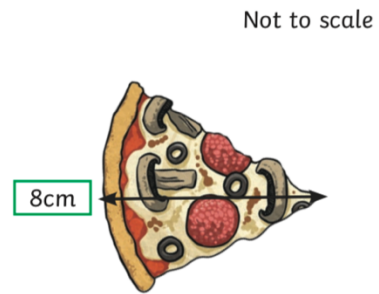
3) Find the diameter and radius of these objects.



A



B



C

	Radius	Diameter
A		
B		
C		

4) Complete the table.

Radius	Diameter
5.5cm	
	13cm
3.75cm	