

Name _____

Date _____



COUNT THE MONEY TO £5 SHEET 3

Write the total amount of money at the end of each row.








	_____
	_____
	_____
	_____
	_____
	_____
	_____

Name

Date



COUNT THE MONEY TO £5 SHEET 3 ANSWERS

	<u>£1.54</u>
	<u>£4.41</u>
	<u>£2.07</u>
	<u>£2.75</u>
	<u>£3.04</u>
	<u>£2.35</u>
	<u>£4.90</u>