




1.

Teddy, Dora and Jack are buying toys.

I have £5.43  Teddy

 I have 534p

I have more money than Dora but less than Teddy.  Jack

How much money could Jack have?  
Is there only one answer?

Jack could have anything from £5.35 to £5.42  
Children may record this as 535 p to 542 p

2.

What would you rather have, five 50p coins or twelve 20p coins?  
Explain your answer fully.



I would rather have five 50 p coins because  $50 \times 5 = 250p$  but  $20 \times 12 = 240p$

3.

Amir has these digits cards.



He uses them to fill the frame below:



He makes a total that is more than three pounds but less than six pounds.

How many amounts can he make?

Order your amounts in ascending order.

£3.24, £3.26  
£3.42, £3.46  
£3.62, £3.64  
£4.23, £4.26  
£4.32, £4.36  
£4.62, £4.63