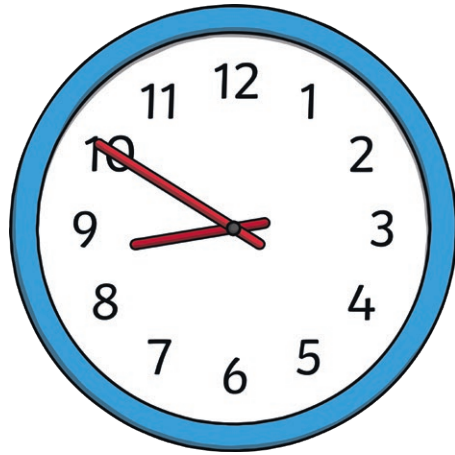



Time Word Problem Challenge Cards



Time Word Problem Challenge Cards

1. Mum puts the chicken in the oven at 4:25 p.m. She let it bake covered for 10 minutes, then uncovered for 35 minutes more. What time will the chicken come out of the oven?



Time Word Problem Challenge Cards

2. Your sister practised her dance routine for 45 minutes. She stopped practising at 4:50 p.m. What time did she start practising?



Time Word Problem Challenge Cards

3. You worked on your homework from 4:00 p.m. to 5:10 p.m. How long did you spend doing your homework?



Time Word Problem Challenge Cards

4. The teacher marked tests from 7:15 p.m. until 8:03 p.m. How long did they spend marking tests?



Time Word Problem Challenge Cards

6. Your neighbour began her run at 8:00 a.m. She ran for 45 minutes. She walked for a further 20 minutes. At what time did she finish her exercise?



Time Word Problem Challenge Cards

5. Your brother practised karate for 2 hours and 15 minutes. He finished practising at 6:05 p.m. What time did he begin?



Time Word Problem Challenge Cards

7. Dad worked in the garden for an hour and 25 minutes. If he finished the work at 7:00 p.m., what time did he start?



Time Word Problem Challenge Cards

8. Alex painted from 9:40 p.m. until 10:20 p.m. How long did she spend painting?



Time Word Problem Challenge Cards

10. Christina spent 35 minutes writing in her diary. If she finished writing at 8:15 p.m., when did she start?



Time Word Problem Challenge Cards

9. Helen worked on a project after school. She worked from 4:10 p.m. until 6:30 p.m. How long did she work?



Time Word Problem Challenge Cards

11. Edward needed 25 minutes to bake some cookies and 50 minutes to bake some brownies. If he began baking at 7:30 p.m., when would he finish?



Time Word Problem Challenge Cards

12. Sasha watched a film that lasted for an hour and 45 minutes. If the film ended at 2:55 p.m., when did it start?



Time Word Problem Challenge Cards

14. Sky swam laps for 1 hour and 7 minutes. If she stopped at 6:05 p.m., when did she begin?



Time Word Problem Challenge Cards

13. Vic walked for 45 minutes. If he began at 6:04 p.m., when did he finish?




Time Word Problem Challenge Cards

15. Ryan went to the cinema to watch a film. It started at 3:15 p.m. and ended at 5:25 p.m. How long was the film?



Time Word Problem Challenge Cards

16. Robert began playing the piano at 4:30 p.m. He played for 35 minutes and then played for a further 25 minutes. What time did he finish playing?



Time Word Problem Challenge Cards

18. Molly watched TV for 32 minutes. If she started watching at 7:08 p.m., when did she stop?



Time Word Problem Challenge Cards

17. Morgan played football for an hour and 5 minutes. He played basketball for 40 minutes. If he began playing at 3:00 p.m., what time did he finish?



Time Word Problem Challenge Cards

19. Marcus took 2 hours and 46 minutes to finish his chores. If he began at 4:51 p.m., when did he finish?



Time Word Problem Challenge Cards

20. Trish began practising her gymnastics routine at 3:30 p.m. She finished at 6:45 p.m. For how long did she practise?



[twinkl.com](https://www.twinkl.com)

Time Word Problem Challenge Cards Answers

- | | |
|---------------------------|----------------------------|
| 1. 5:10 p.m. | 11. 8:45 p.m. |
| 2. 4:05 p.m. | 12. 1:10 p.m. |
| 3. 1 hour and 10 minutes | 13. 6:49 p.m. |
| 4. 48 minutes | 14. 4:58 p.m. |
| 5. 3:50 p.m. | 15. 2 hours and 10 minutes |
| 6. 9:05 a.m. | 16. 5:30 p.m. |
| 7. 5:35 p.m. | 17. 4:45 p.m. |
| 8. 40 minutes | 18. 7:40 p.m. |
| 9. 2 hours and 20 minutes | 19. 7:37 p.m. |
| 10. 7:40 p.m. | 20. 3 hours 15 minutes |

[twinkl.com](https://www.twinkl.com)