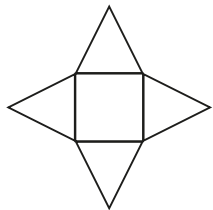
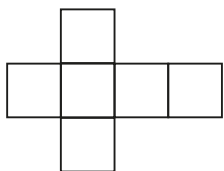



1 Match the net to the correct label.



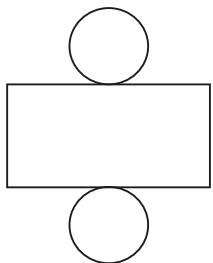
cube



cylinder



square-based pyramid



cuboid



2 Complete the sentences.

- a) The faces of a _____ are all square.
- b) A square-based pyramid has triangular faces and square face.
- c) The net of a _____ is made up of 2 circles and a rectangle.

3



The net of a cuboid is made up of 4 rectangles and 2 squares.

Whitney



The net of a cuboid is made up of 6 rectangles.

Rosie

Who do you agree with?

- Whitney Rosie both of them

Explain your reasons.

2 Complete the sentences.

- a) The faces of a _____ are all square.
- b) A square-based pyramid has triangular faces and square face.
- c) The net of a _____ is made up of 2 circles and a rectangle.

3



The net of a cuboid is made up of 4 rectangles and 2 squares.

Whitney



The net of a cuboid is made up of 6 rectangles.

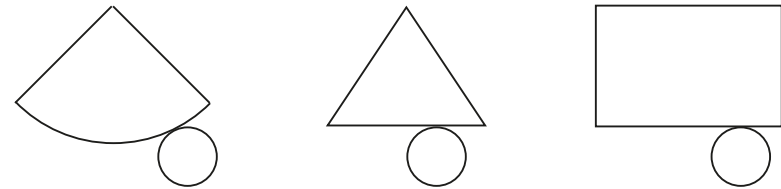
Rosie

Who do you agree with?

- Whitney Rosie both of them

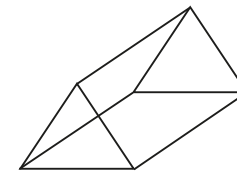
Explain your reasons.

4 Which diagram is the net of a cone?

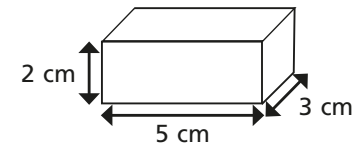


Compare answers with a partner.

5 Draw the net for a triangular prism on a squared grid.



6 Draw an **accurate** net for this cuboid on a centimetre squared grid.



7 Draw two different cuboids on isometric paper.