

## Analogue to Digital – 12 Hour

7a. Louis arrives at the theatre at the time shown on the analogue clock. He thinks he's on time to watch the play.



Act	Start Time
Warm-up act	07:12pm
Play	07:28pm
Interval	08:47pm


Is he correct? Explain why.



PS

## Analogue to Digital – 12 Hour

7b. Lin arrives at the horse show at the time shown on the analogue clock. She thinks she's on time to watch eventing.



Activity	Start Time
Dressage	09:38am
Show jumping	12:22pm
Eventing	03:46pm

Is she correct? Explain why.



PS

8a. Which is the earliest and latest time?

AM

01:04am

01:02am

09:29pm

09:31pm

PM

AM



PS

8b. Which is the earliest and latest time?

PM

02:17am

11:27pm

AM

10:59pm

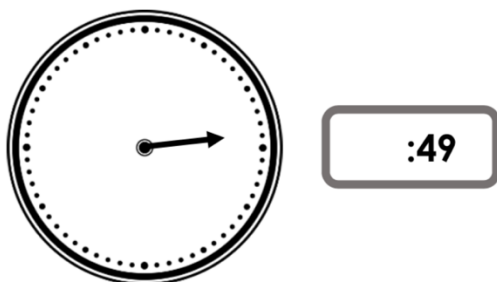
AM

PM




PS

9a. These clocks both show the same time. What could the missing minute hand and hour be?



R

9b. These clocks both show the same time. What could the missing hour hand and minutes be?



R