

## Solving comparison, sum and difference problems





### Support Task

- 1) Queen Elizabeth II is the longest reigning UK monarch. This table shows the five previous longest reigns.
- How many more years did James rule than Henry? \_\_\_\_\_
  - What is the sum of the two longest reigns shown in the table? \_\_\_\_\_
  - What is the difference between the longest and shortest reign shown on the table? \_\_\_\_\_

King or Queen	Length of Reign in Whole Years
Henry III	56
Edward III	50
James VI	57
George III	59
Victoria	63



- 2) This pictogram shows the reigns of some of the kings and queens of the UK.
- Henry V ruled for 4 years longer than Mary II. Fill in the pictogram to show this.
  - The difference between the reigns of John and James is 5 years. John's reign was shorter. Fill in the pictogram to show this.
  - How much longer would Henry have needed to stay on the throne to match James' reign?  
\_\_\_\_\_

King or Queen	Length of Reign  = 2 years
Mary I	
Mary II	
Henry V	
John	
James I	

[Type here]