


Zoo Coordinates

Which zoo animal is at the following coordinates?



(H,11) = _____ (H,6) = _____

(C,1) = _____ (L,6) = _____

(L,11) = _____ (B,5) = _____

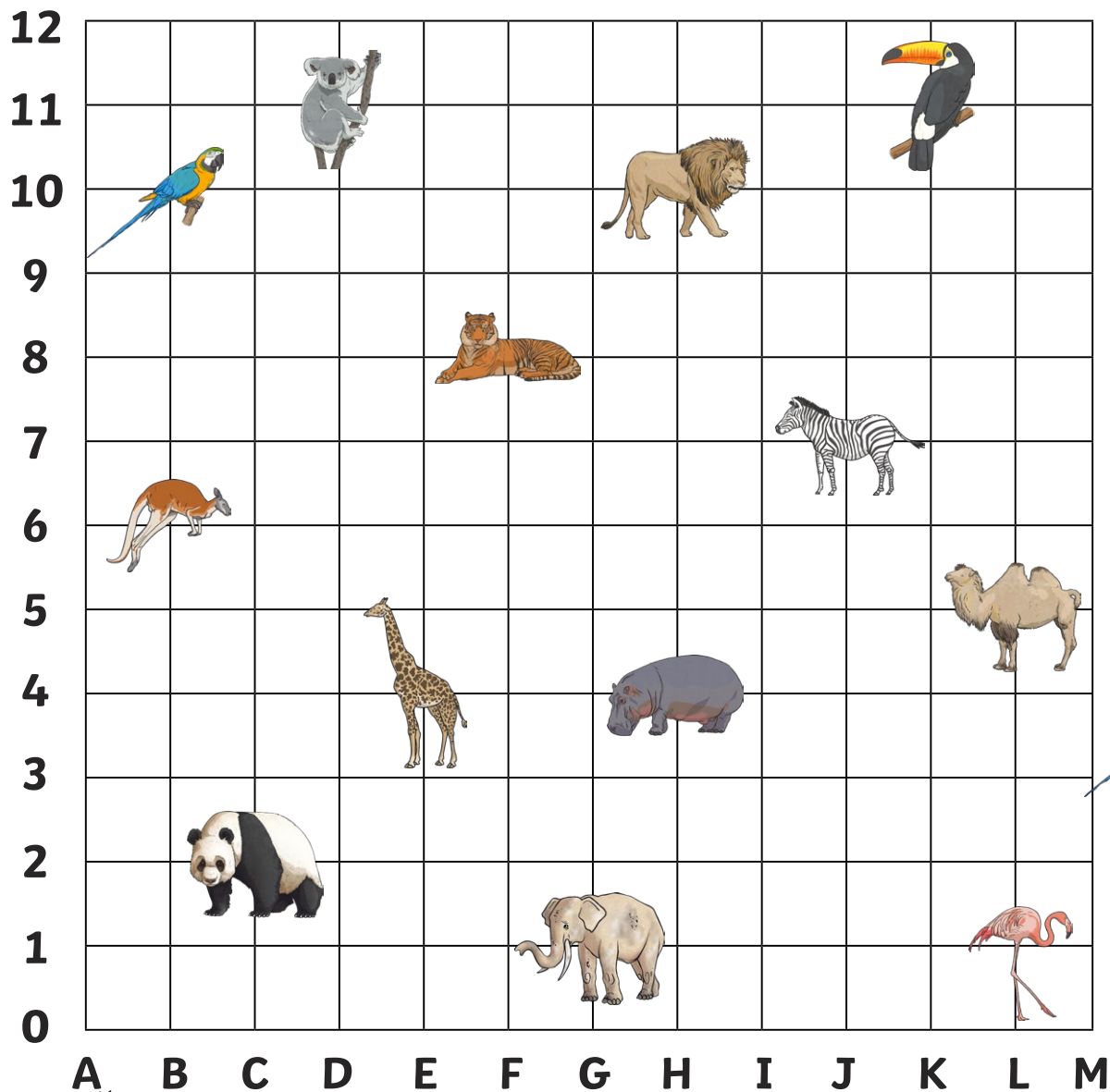
(J,3) = _____ (J,9) = _____

(E,11) = _____ (F,8) = _____

parrot	kangaroo	panda
koala	tiger	giraffe
elephant	flamingo	hippo
camel	zebra	lion
toucan		




Zoo Coordinates



Write the coordinates for the zoo animals:



= (,)



= (,)



= (,)



= (,)



= (,)



= (,)



= (,)



= (,)



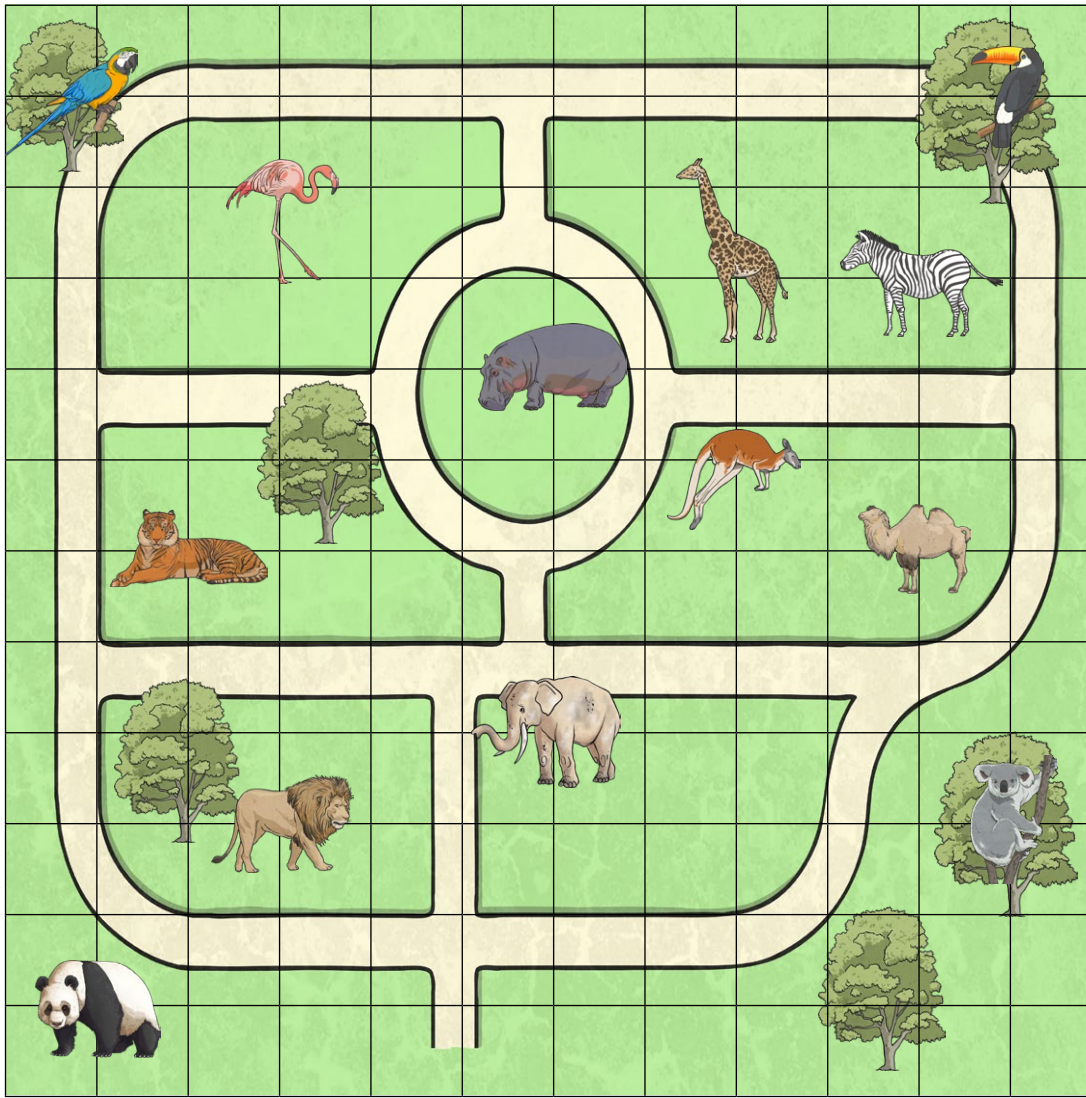
= (,)



= (,)

Zoo Coordinates

12
11
10
9
8
7
6
5
4
3
2
1
0



A B C D E F G H I J K L M

Which animal is at these coordinates on the zoo map?

(L,11) = _____

(C,6) = _____

(G,8) = _____

(D,10) = _____

(L,3) = _____

(B,1) = _____

Write the coordinates of these animals on the zoo map:



= _____



= _____



= _____



= _____



= _____



= _____

Draw your own zoo animals at these coordinates on the map:

(G,1)

(B,9)

(H,3)

(I,3)

(I,6)











(L,1)

Zoo Coordinates - Answers



(H,11) = lion
 (C,1) = panda
 (L,11) = toucan
 (J,3) = flamingo
 (E,11) = koala
 (H,6) = hippo
 (L,6) = camel
 (B,5) = kangaroo
 (J,9) = zebra
 (F,8) = tiger









	= (D,11)		= (E,4)
	= (H,10)		= (B,6)
	= (K,11)		= (H,4)
	= (B,10)		= (L,5)
	= (F,8)		= (L,1)



Which animal is at these coordinates on the zoo map?

(L,11) = toucan (C,6) = tiger
 (G,8) = hippo (D,10) = flamingo
 (L,3) = koala (B,1) = panda

Write the coordinates of these animals on the zoo map:

	= (B,11)		= (G,4)
	= (D,3)		= (K,6)
	= (K,9)		= (I,7)