

2020 National Curriculum Tests

# Key stage 2

## KS2 Lockdown SATs

First name						
Middle name						
Last name						
Date of birth	Day		Month		Year	
School name						
DfE number						

## Instructions

### Questions and Answers

You have until **4pm Thursday 14<sup>th</sup> May** to complete the booklet.

Work as quickly and as carefully as you can.

If you cannot do a question, go on to the next one. You can come back to it later if you have time.

If you finish before the end, go back and check your work.

### Marks

The number under each question at the side of the page tells you the number of marks available for each question.

All scores will be converted to a standardised score to determine whether you are **'Amazing, 'Amazing or 'Amazing' at the Year 6 Standard.**









## Paper 1: How well do you know your school?

1. What is our school dinner hall called? **1 mark**
2. How goal posts are there on the field? **1 mark**
3. Name 4 of our school values. **4 marks**
4. How many classes are there at Dobcroft? **1 mark**
5. Name all the Y6 teachers- spelt correctly. **3 marks**
6. What is on the display outside the Y6 toilets, above our coat pegs? **1 mark**
7. How many Y6 classrooms have sinks in them? **2 marks**
8. What is the bench called on the front yard where people can sit if they feel a little lonely and would like a friend to play with? **2 marks**
9. What days are Y6 PPA days? **1 mark**
10. What was the Y6 trip called where we were taught how to stay safe in different situations. **1 mark**

## Paper 2: How well do you know chocolate?

Can you name the chocolate bars below?

You will be awarded 1 mark for each correct answer.

			
1.	2.	3.	4.
			
5.	6.	7.	8.
			
9.	10.	11.	12.
			
13.	14.	15.	16.

## Paper 3: Where's Wally?

Timed paper. You will need a stopwatch.

Time how many seconds it takes to find Wally.



**You can receive up to 10 marks.**

**Within one minute = 10 marks**

**Between 1 minute and 2 minutes = 9 marks**

**Between 2 minutes and 3 minutes = 8 marks**

**Between 3 minutes and 4 minutes = 7 marks**

**Between 4 minutes and 5 minutes = 6 marks**

**Between 5 minutes and 6 minutes = 5 marks**

**Between 7 minutes and 8 minutes = 4 marks**

**Between 8 minutes and 9 minutes = 3 marks**

**Between 9 minutes and 10 minutes = 2 marks**

**Anything after 10 minutes = 1 mark**

## Paper 4: How well do you know the teachers?

Match the boxes to make the sentences true

1 mark for each correct answer

Mr Harrison

Miss Taylor

Mrs Conroy

Miss Harper

This teacher had performed at  
Glastonbury four times

This teacher has ridden a zebra

This teacher can solve a Rubik's cube in  
a few minutes

This teacher has run 15 half marathons

## Paper 5: Scavenger Hunt

**Timed paper. You will need a stopwatch.**

**Starting in the room of your choice, ask a member of your household to time how long it takes to find the objects below. You can find the items in any order. The times will show you how many points you can achieve. Add a 10 second penalty for any objects not found.**

### **FIND THE FOLLOWING OBJECTS:**

- An unused toilet roll
- An item of clothing that is the colour you would get if you mixed blue and yellow together
- An item of clothing that has at least 4 buttons on
- A pen, pencil or crayon that is the top colour of a rainbow
- The word '**SCHOOL**' - look in a book, magazine or newspaper
- Your school jumper
- A dessert spoon
- A school photograph of yourself
- Something that will hold everything you have found

**You can receive up to 10 marks.**

Within 5 minutes = 10 marks  
Between 5 minute and 6 minutes = 9 marks  
Between 6 minutes and 7 minutes = 8 marks  
Between 7 minutes and 8 minutes = 7 marks  
Between 8 minutes and 9 minutes = 6 marks  
Between 9 minutes and 10 minutes = 5 marks  
Between 10 minutes and 11 minutes = 4 marks  
Between 11 minutes and 12 minutes= 3 marks  
Between 12 minutes and 13 minutes = 2 marks  
Anything after 13 minutes = 1 mark

## Paper 6: Art

'Everyday object' art challenge. Select an object to include in a drawing. Your drawing will be assessed by a panel of adjudicators (your parents/carers /someone in the house) and given a score out of 5 for each area:

Creativity- up to 5 points

Artistic style - up to 5 points

Humour- up to 5 points

We would love to see them too if you can take a picture and send it. **15 marks**





## Paper 7: Maths

### Solve the maths problems

1. You are driving a bus to Dobcroft. You drive through Abbeydale and pick 1 child up, you drive through The Moor and pick 1 child up, you drive through Fargate and pick 5 children up, you drive through Ecclesall and pick 4 children up. You drive through Abbeydale again and pick up 10 children. 6 children get off because they decide to walk the rest of the way. Before reaching school, you pick up 14 children from Dobcroft Road. Who is the bus driver?

2. Crossing the River

A farmer is trying to cross a river. He is taking with him a rabbit, carrots and a fox and he has a small raft. He can only bring 1 item a time across the river because his raft can only fit either a rabbit, the carrots or the fox. How does he cross the river? (You can assume that nothing is eaten or escapes!)

**3 marks**

**1 mark**

3. How many squares are in the picture?



**3 marks**

## Paper 8: Reading

Name the books using the emoji clue

1. 🐱 ➡️ 🎩 1 mark

2. 🍏 🍐 🍓 🍊 🍰 🍦 🐛 1 mark

3. 📖 👧 📖 📖 1 mark

4. ✨ 🥚 🔍 🐷 1 mark

5. 🐷 🐷 🐷 🐎 1 mark

6. 👧 🍷 🐰 ⌚ ❤️ ♠️ 🐛 ☕ 👑 1 mark

7. 👧 🍑 1 mark

8. 👦 ⚡ 🦉 🧙 🧙 🧹 1 mark

9. 👧 🐷 🕷️ 🕸️ 1 mark

10. 👦 🍫 🏭 1 mark

11. 🌈 🐟 1 mark

12. 👧 ☕ 🐅 1 mark

13. 🖤 🐎 1 mark

14. 🐻 👁️ 1 mark

15. 🦁 🧙 🚪 1 mark

## Paper 9: Secondary School

Visit your secondary school's website and answer the following questions.

1. What is your secondary school's website?  
**1 mark**
2. What is the motto or key values? E.g. St Barnabas is 'Aspire, Believe, Together Achieve'  
**1 mark**
3. What is the principal/ head teacher's name?  
**1 mark**
4. What are the house groups?  
**1 mark**
5. Name 3 exciting facts.  
**3 marks**
6. Draw the school logo.  
**1 mark**
7. What is the school uniform?  
**2 marks**
8. Do they have a social media page to share information?  
**1 mark**
9. Find a quote from a pupil at your secondary school. What do they think of the school?  
**1 mark**
10. What sports facilities does your secondary school have?  
**1 mark**

## Paper 10: End of SATs celebration

Crazy hair celebration. Your hair style will be assessed by a panel of adjudicators (your parents/carers /someone in the house) and given a score out of 5 for each area:

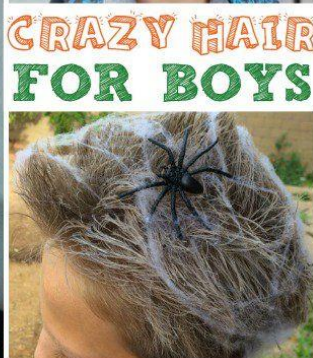

Creativity- up to 5 points

Artistic style - up to 5 points

Humour- up to 5 points

We would love to see them too if you can take a picture and send it.

**15 marks**



## CONGRATULATIONS!

### **You have completed the Lockdown SATs – CONGRATULATIONS!**

Dobcroft, we are proud of what you have achieved so far in Year 6. It is a pleasure to teach you all. Even though SATs was cancelled, we know how hard you worked during the lead up and nothing will take that away. You are all incredibly determined and enthusiastic about learning. Not only that, you work well as a team and support and encourage each other. It's an absolute pleasure to watch you grow into mature young people with individual qualities and personalities. Although we are not currently at school, we will celebrate your time at Dobcroft because no one deserves it more than you!



**Keep smiling and stay positive!**

**Mrs Conroy, Mr Harrison, Miss Taylor and  
Miss Harper**

***Working hard is important but there is something that matters even more: believing in yourself***