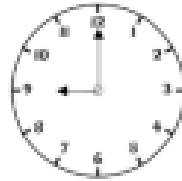



Match the times to the clocks showing the same time.

9 o'clock in the morning



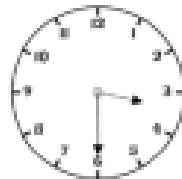
19 : 15

Half past 3 in the afternoon



09 : 00

Quarter past 7 in the evening



15 : 30

Complete the times.

13 : 45

Quarter to two in the _____

__ : 45

Quarter past three in the afternoon

11 : 20

Twenty past eleven in the _____

17 : __

Twenty-five to six in the evening

15 : 50

Ten to four in the _____

__ : __

Twenty to 9 in the morning