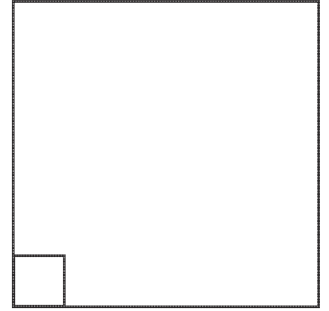


Is It A Right Angle?

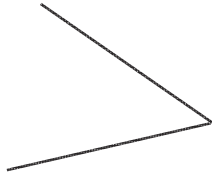
An angle is a measurement of a turn. They can be found where two lines meet.

A right angle is in the corner of a rectangle or square.

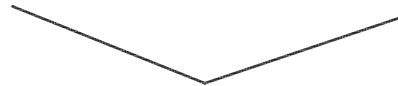
Look at the angles below. Decide whether each one is a right angle, bigger than a right angle or smaller than a right angle. Write down your answer on the line.



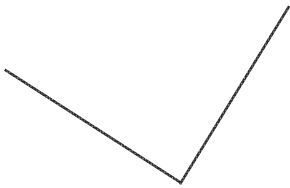
1.



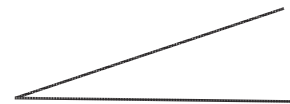
2.



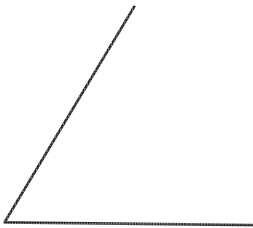
3.



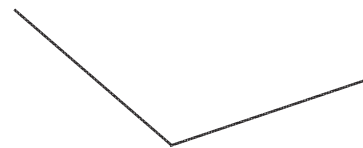
4.



5.



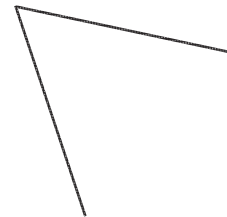
6.



7.



8.

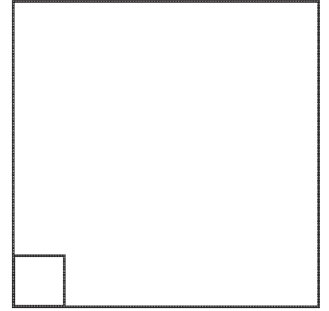


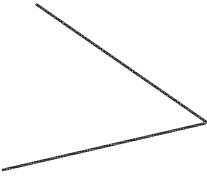
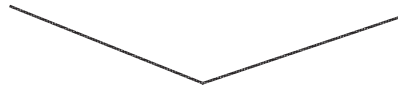
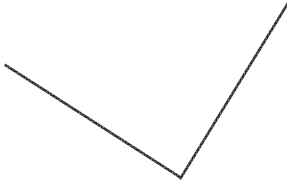
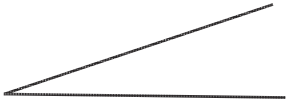
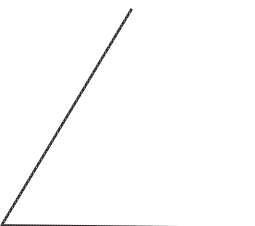
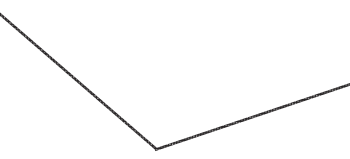

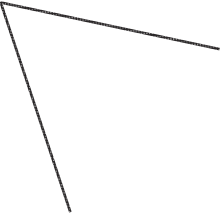
Is It A Right Angle? Answers

An angle is a measurement of a turn. They can be found where two lines meet.

A right angle is in the corner of a rectangle or square.

Look at the angles below. Decide whether each one is a right angle, bigger than a right angle or smaller than a right angle. Write down your answer on the line.



1.  <u>smaller than a right angle</u>	2.  <u>bigger than a right angle</u>
3.  <u>right angle</u>	4.  <u>smaller than a right angle</u>
5.  <u>smaller than a right angle</u>	6.  <u>bigger than a right angle</u>
7.  <u>right angle</u>	8.  <u>smaller than a right angle</u>