

Counting in 25s

1 The children have each got some packets of balloons.

Filip	Eva	Mo	Esther

a) How many balloons does each child have?

Filip Eva Mo Esther

b) How many balloons are there in 6 packets?


2 Complete the number tracks.

200	225	250					
-----	-----	-----	--	--	--	--	--

750	725	700					
-----	-----	-----	--	--	--	--	--

3 Ron is counting up in 25s from 0 to 1,000

0, 25, 50 ...



a) Circle all the numbers that Ron will say.

- | | | | |
|----|-----|-----|-----|
| 51 | 100 | 175 | 305 |
| 90 | 258 | 720 | 725 |

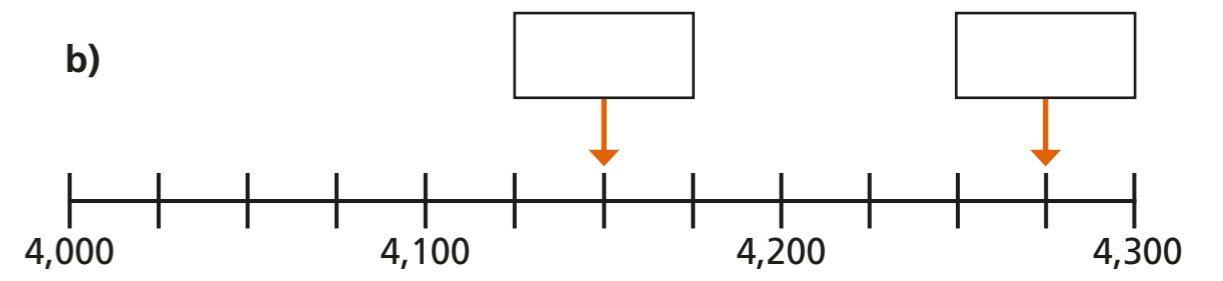
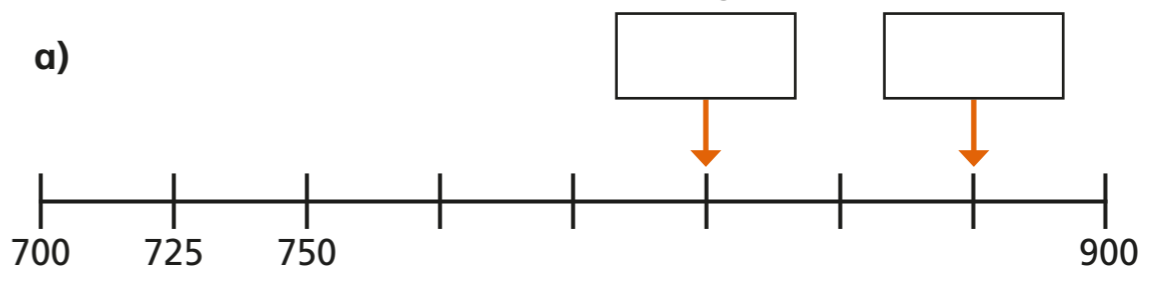
b) Ron keeps counting past 1,000

Ron will say all of these numbers.

- | | | | |
|-------|-------|-------|-------|
| 1,025 | 1,775 | 1,900 | 2,025 |
|-------|-------|-------|-------|

Explain how we know this.

4 What numbers are the arrows pointing to?



- 5 Is this true or false?
These scales will balance.



Explain your answer.

- 6 Dora has 28 sheets of stickers.
Each sheet contains 25 stickers.
She has 700 stickers in total.




- a) How many stickers are there on 29 sheets?

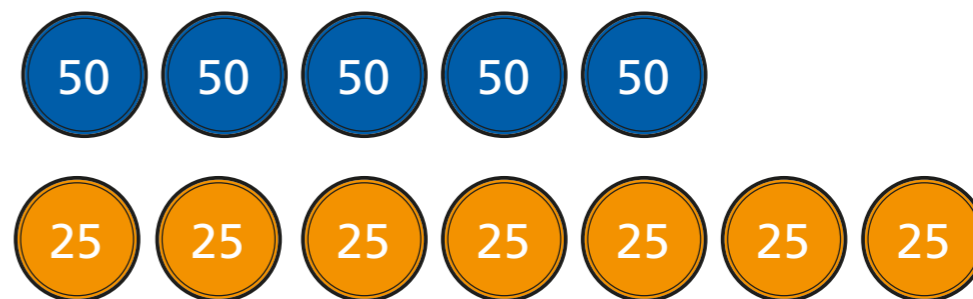
- b) How many stickers are there on 30 sheets?

- c) How did you work this out?

- 7 Players in a game win coloured tokens.
A blue token wins 50 points.
An orange token wins 25 points.



- a) Kim wins these tokens in round 1



How many points does she win?

Explain how you know.

- b) By the end of the game, Kim has 600 points.

How many more points has she won?

What new tokens could she have won?

