

# Years, months, weeks and days


1 Sort the months into the table.

January	April	July	October
February	May	August	November
March	June	September	December

Less than 30 days	30 days	31 days
February	April June September November	January March May July August October December

2


2020 is a leap year.



a) How many days will there be in 2020?

366 days

There will be 366 days in the year 2040




b) Do you agree with Whitney? Yes

Explain your answer.

3

2 months is the same as 61 days.



Is this always true, sometimes true or never true?

Tick your answer.

always true    
  sometimes true    
  never true

Prove your answer.

July & August - 62 days  
 June & July - 61 days

4

Write <, > or = to complete the statements.

- 1 week = 7 days
- 15 days > 2 weeks
- 15 days < 1 month
- 360 days < 1 year
- 360 weeks > 1 year
- 12 months = 1 year
- 20 months < 2 years
- 40 months > 3 years

5 Complete the tables.

Weeks	Days
2	14
4	28
8	56
80	560
40	280
28	196


Days	Weeks
7	1
21	3
70	10
63	9
91	13
252	36

6

September						
M	T	W	Th	F	Sa	Su
		1	2	3	4	5
6	7	8	9	10	11	12
13	14	15	16	17	18	19
20	21	22	23	24	25	26
27	28	29	30			

a)

Jack




My birthday is on the third Friday of September.

When is Jack's birthday?

Date:  Month September

b)

Amir



My birthday is on the same date as Jack's but in August.

When is Amir's birthday?

Date:  Month August

7

Tim is three times as old as Anna.  
George is 4 months older than Anna.  
Anna is 2 years and 2 months old.  
What is their combined age?

years  months

8

Jack, Annie and Alex went for a run together on Tuesday 5 January.

Jack ran every 2 days after that.

Alex ran every 3 days after that.

a) How many more times in January will Jack and Alex run together on the same day?

more times

b) Annie only runs on Tuesdays.

When is the next time that all three friends will run together on the same day?

16<sup>th</sup> Feb

