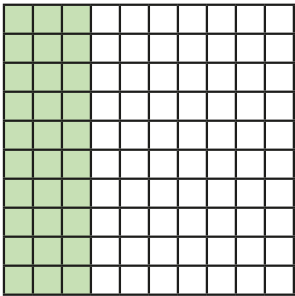
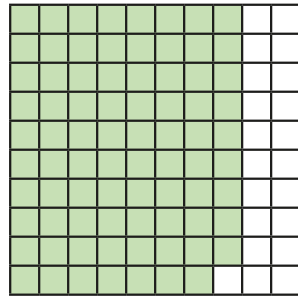


1 Each hundred square represents one whole.
Use the hundred squares to help you complete the additions.

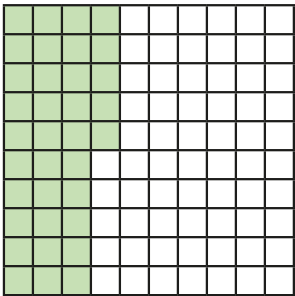
a) $0.3 + \square = 1$




c) $1 = \square + 0.79$



b) $0.35 + \square = 1$



d) $\square + 0.01 = 1$

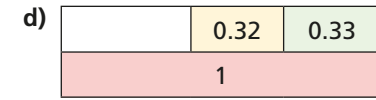

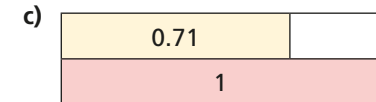



2 Complete the calculations.
Shade hundred squares to help you.

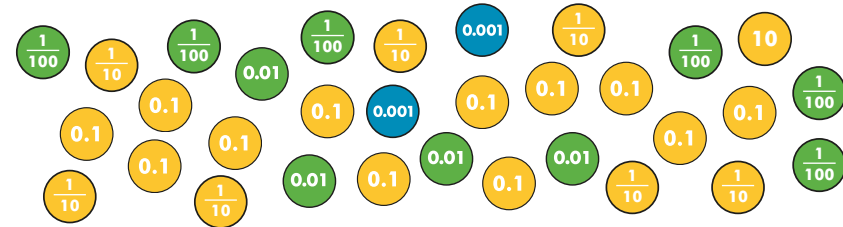
a) $1 = 0.47 + \square$

b) $0.02 + 0.2 + \square = 1$

3 Complete the bar models.



4 Teddy has these counters.



He wants to exchange these for as many 1s counters as possible.
How many 1s counters can he collect?

5 Complete the additions.

$54 + \square = 100$

$0.54 + \square = 1$

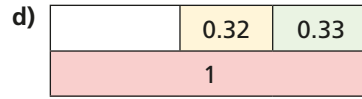
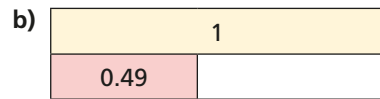
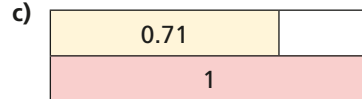

$5.4 + \square = 10$

$0.054 + \square = 0.1$

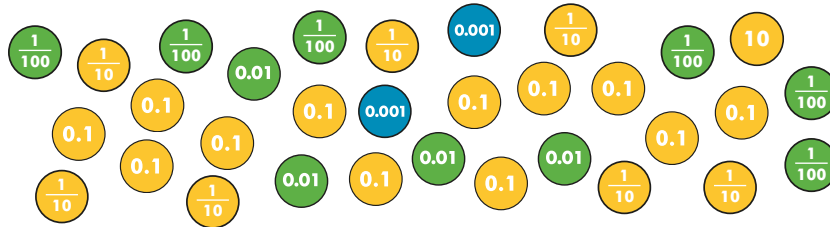
What is the same and what is different about your answers?



3 Complete the bar models.



4 Teddy has these counters.



He wants to exchange these for as many 1s counters as possible.
How many 1s counters can he collect?

5 Complete the additions.

$$54 + \square = 100$$

$$0.54 + \square = 1$$

$$5.4 + \square = 10$$

$$0.054 + \square = 0.1$$

What is the same and what is different about your answers?

6 Complete the sentences.

a) 6 tenths + tenths = 1 whole

b) 23 hundredths + hundredths = 1 whole

c) 2 tenths + hundredths + tenths = 1 whole

7 Match the pairs of decimals that add together to make 1 whole.

0.12	0.988
0.21	0.79
0.212	0.778
0.012	0.788
0.222	0.88

8 Mo has completed these calculations.

He has got them all incorrect.

What mistake has Mo made?

Correct Mo's calculations.

a) $0.22 + 0.88 = 1$
 b) $0.39 + 0.71 = 1$
 c) $0.677 + 0.433 = 1$

a) $0.22 + \square = 1$

c) $0.677 + \square = 1$

b) $0.39 + \square = 1$