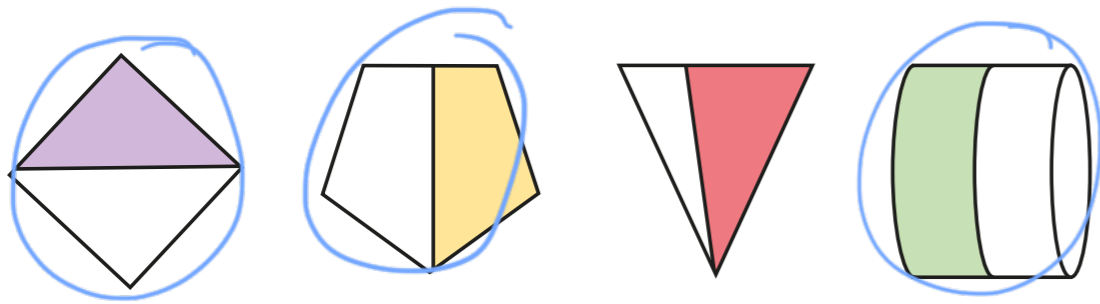
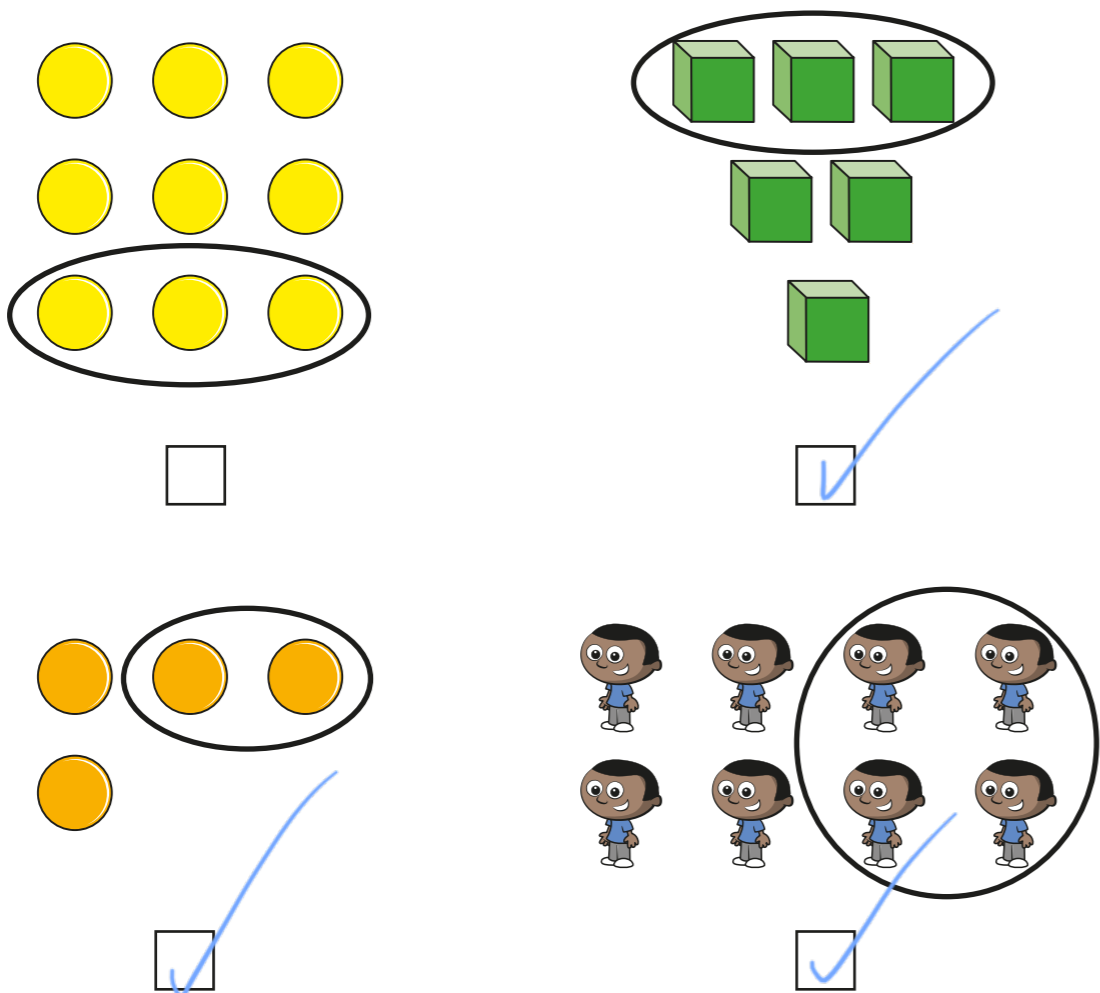


# Equivalence of $\frac{1}{2}$ and $\frac{2}{4}$

1 Circle the shapes that have  $\frac{1}{2}$  shaded.



2 Tick the groups that have  $\frac{1}{2}$  circled.



3 Here are two bar models.

a) Colour  $\frac{2}{4}$  of the bar model.



b) Colour  $\frac{1}{2}$  of the bar model.



What do you notice? Talk to a partner.

4 Use the sweets to help you answer the questions.

a) What is  $\frac{1}{2}$  of 12?

6



b) What is  $\frac{1}{4}$  of 12?

3

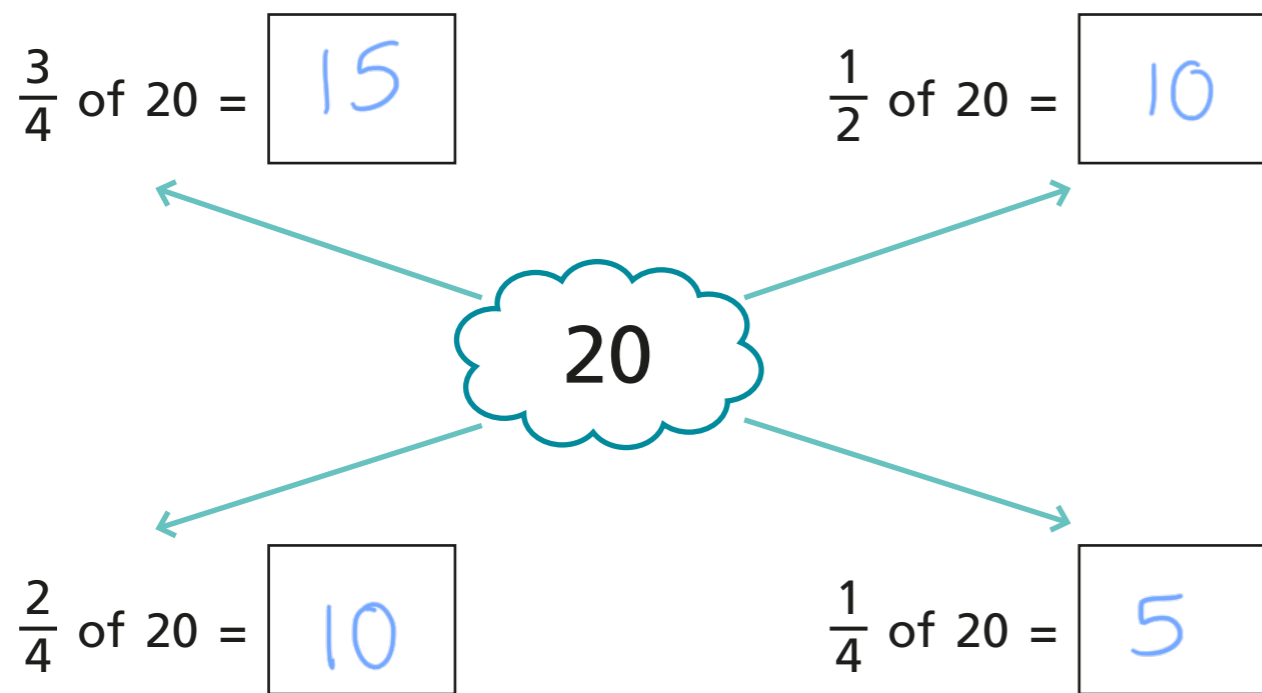


c) What is  $\frac{2}{4}$  of 12?

6



5 Write the missing numbers.



6 Solve the problems.

a) Find  $\frac{2}{4}$  of £8

£ 4

b) Find  $\frac{2}{4}$  of 24 kg


12 kg

How did you work out the answers?

7 Write the missing number.

$$\frac{1}{2} = \frac{\boxed{2}}{4}$$

8





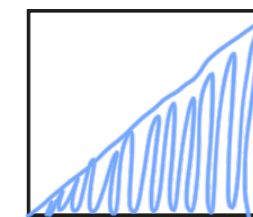

You cannot find  $\frac{2}{4}$  of this shape as you cannot divide it into 4 equal parts.



a) Do you agree with Dexter?   No  

Talk about it with a partner.

b) Colour  $\frac{2}{4}$  of each shape.



Talk to a partner about how you did it.