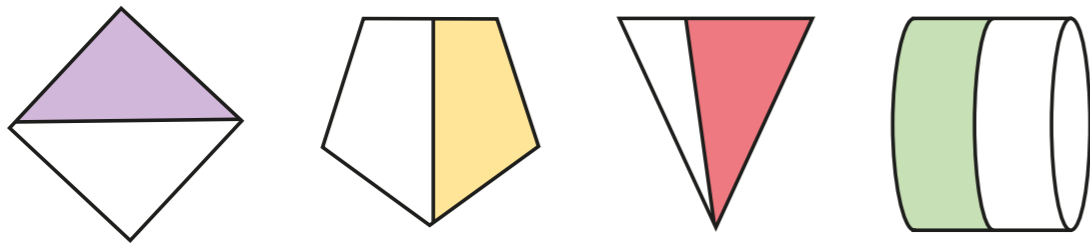
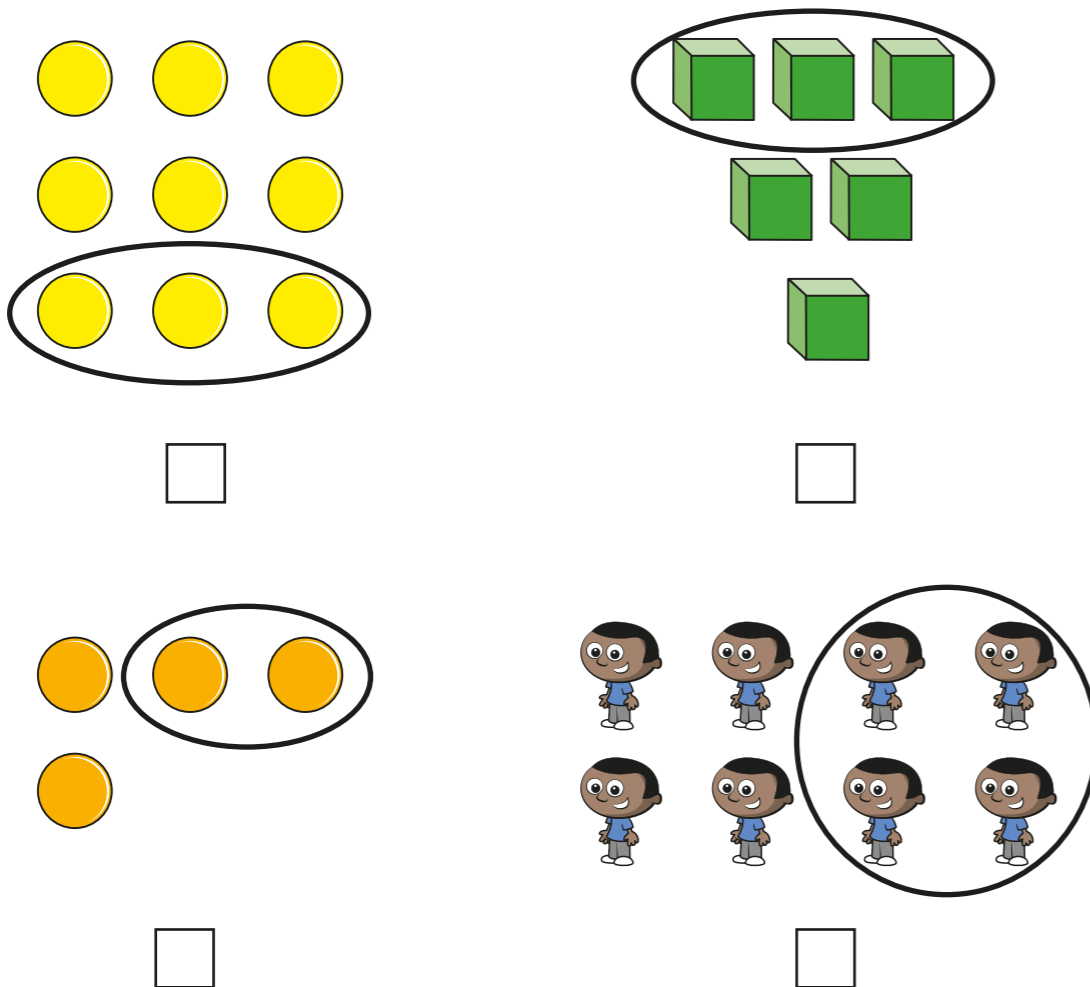


Equivalence of $\frac{1}{2}$ and $\frac{2}{4}$

1 Circle the shapes that have $\frac{1}{2}$ shaded.



2 Tick the groups that have $\frac{1}{2}$ circled.



3 Here are two bar models.

a) Colour $\frac{2}{4}$ of the bar model.



b) Colour $\frac{1}{2}$ of the bar model.



What do you notice? Talk to a partner.

4 Use the sweets to help you answer the questions.

a) What is $\frac{1}{2}$ of 12?



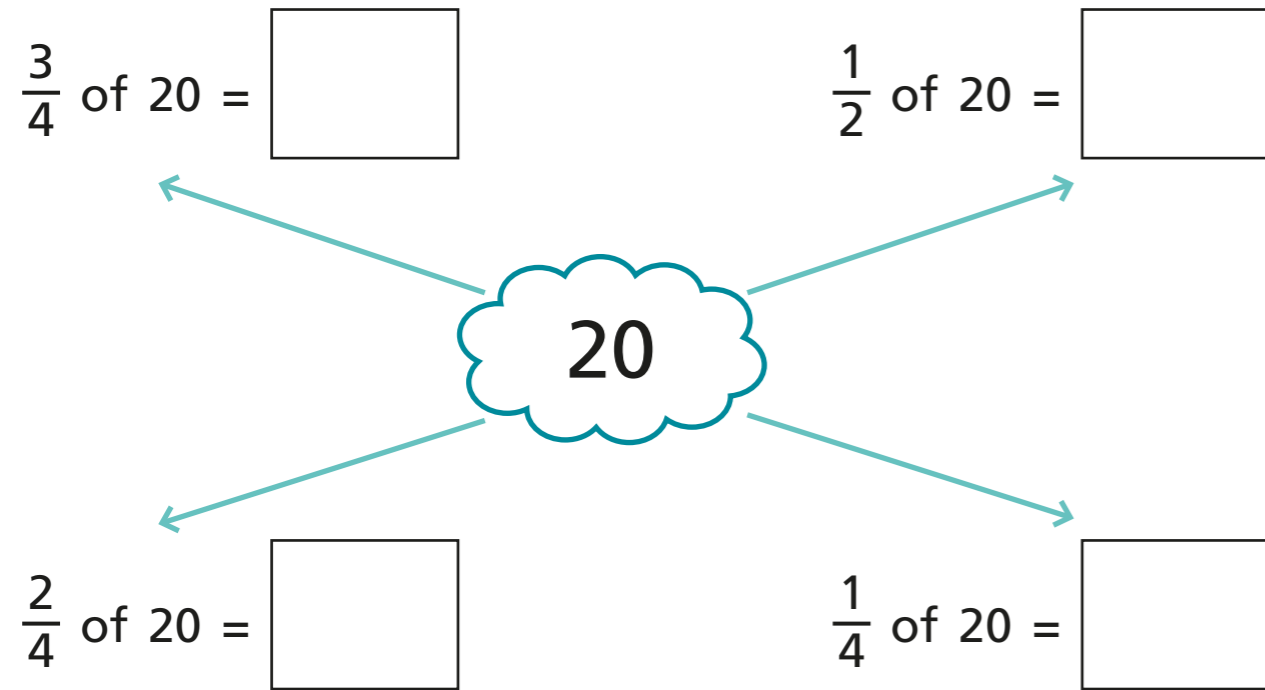
b) What is $\frac{1}{4}$ of 12?



c) What is $\frac{2}{4}$ of 12?



5 Write the missing numbers.



6 Solve the problems.

a) Find $\frac{2}{4}$ of £8

£

b) Find $\frac{2}{4}$ of 24 kg


kg

How did you work out the answers?

7 Write the missing number.

$$\frac{1}{2} = \frac{\square}{4}$$

8



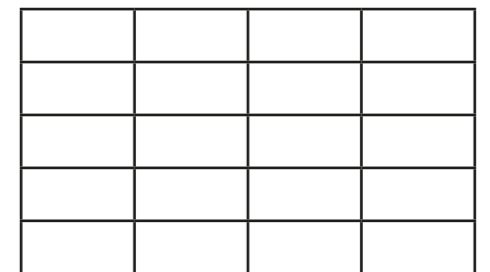
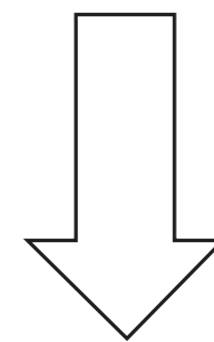
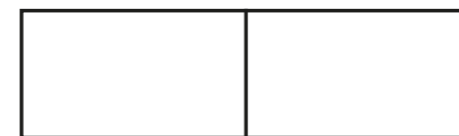
You cannot find $\frac{2}{4}$ of this shape as you cannot divide it into 4 equal parts.



a) Do you agree with Dexter? _____

Talk about it with a partner.

b) Colour $\frac{2}{4}$ of each shape.



Talk to a partner about how you did it.

