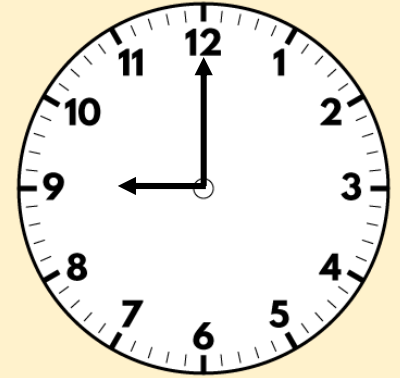


# Flashback Friday

There are 16 flashback questions for you to try. The answers are on the end slides.



1) How many tens are there in 100?

2) How many visitors were there all weekend?

Day	Number of visitors
Saturday	493
Sunday	413

3) Find the difference between £4 and 42p and £2 and 50p


4) What is  $8 \times 6$ ?

1) Which unit of measurement is the best to measure a 5p coin?

millimetres

centimetres

metres



2) How many more visitors were there on Saturday?

Day	Number of visitors
Saturday	● ● ● ● ●
Sunday	● ●


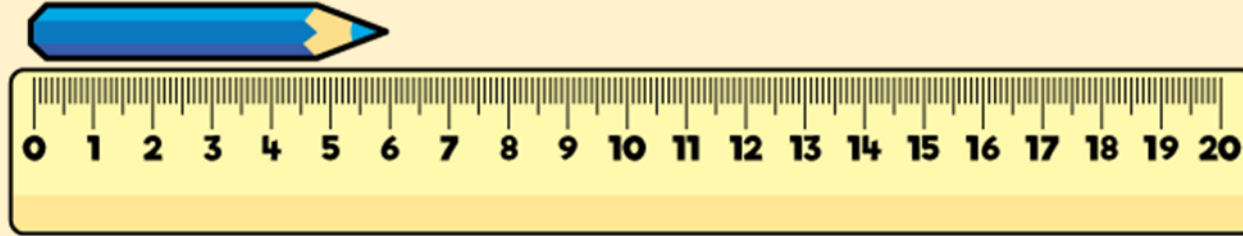
Key

● = 100 visitors

3) Write 376p in pounds and pence.

4) What is 32 divided by 4?

1) How long is the crayon?



2) How many more children play netball than rounders?

Sport played	Number of children
Rounders	● ● ● ◐
Netball	● ● ● ● ●


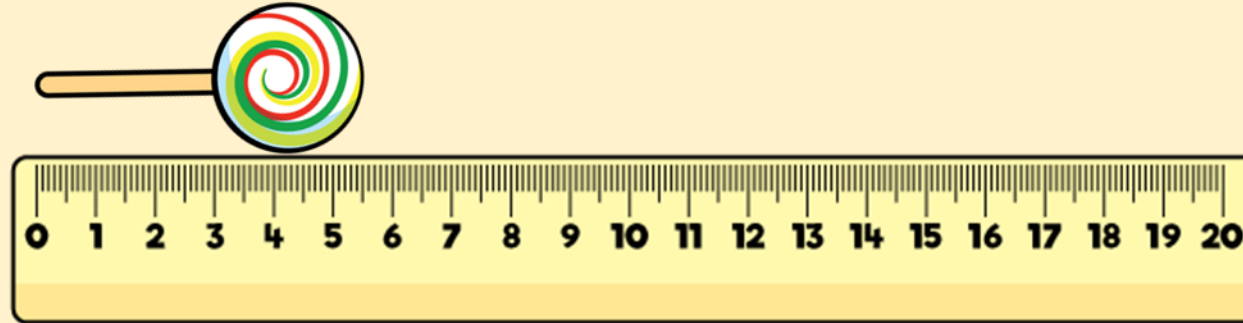
Key

● = 8 children

3) What is £5 and 27 p + £6 and 50 p?

4) How many hundreds are in 462?

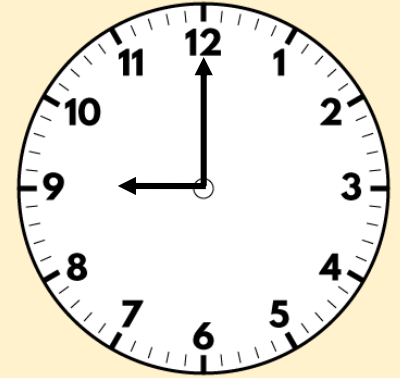
1) How long is the lollipop?



2) Write 18 in tally marks.

3) Find the total of £2 and 94 p and £5 and 79 p.

4) What is  $3 \times 12$ ?



1) How many tens are there in 100? **10 tens**

2) How many visitors were there all weekend?

Day	Number of visitors
Saturday	493
Sunday	413

**906 visitors**

3) Find the difference between £4 and 42p and £2 and 50p

**£1 and 92p**


4) What is  $8 \times 6$ ? **48**

1) Which unit of measurement is the best to measure a 5p coin?

millimetres

centimetres

metres



2) How many more visitors were there on Saturday?

Day	Number of visitors
Saturday	● ● ● ● ●
Sunday	● ●

Key


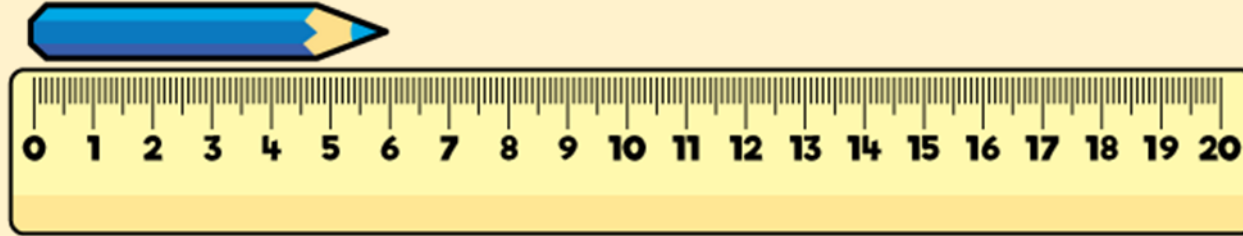
● = 100 visitors

300 visitors

3) Write 376p in pounds and pence. £3 and 76 p

4) What is 32 divided by 4? 8

1) How long is the crayon? **6 cm**



2) How many more children play netball than rounders?

Sport played	Number of children
Rounders	● ● ● ●
Netball	● ● ● ● ●

Key **12 children**


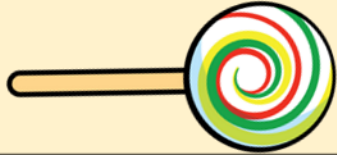
● = 8 children

3) What is £5 and 27 p + £6 and 50 p? **£11 and 77 p**

4) How many hundreds are in 462? **4 hundreds**



1) How long is the lollipop? **5 cm and 5 mm**



2) Write 18 in tally marks. **|||| |||**

3) Find the total of £2 and 94 p and £5 and 79 p. **£8 and 73 p**

4) What is  $3 \times 12$ ? **36**