
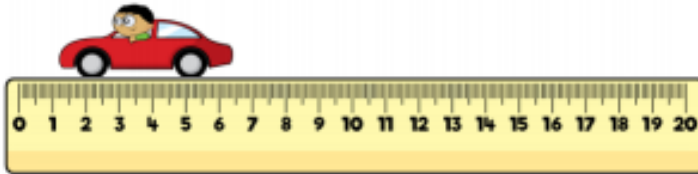


Whitney's ruler is broken.  
How could she use it to still measure items?



Three children measured the same toy car.

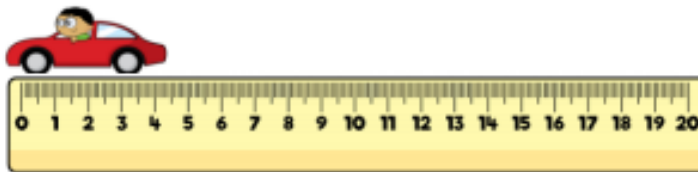
Eva says that the car is 6 cm and 5 mm



Dexter says the car is 5 cm



Annie says the car is 4 cm 5 mm



Who is correct?  
Who is incorrect?  
Explain why.

---